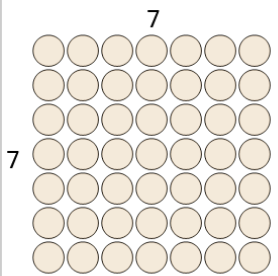




Math worksheet on 'Multiplication - From Model to Answer (Level 2)'. Part of a broader unit on 'Multiplication - 1 and 2 Digit - Practice'

Learn online: app.mobius.academy/math/units/multiplication_1_and_2_digit/

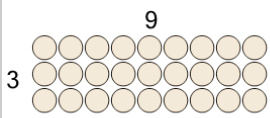
2



Use multiplication to count how many shapes there are

a	44	b	47
c	5	d	49
e	43	f	53

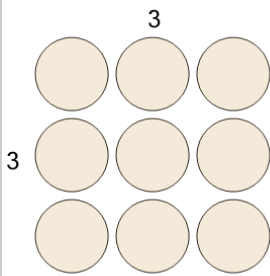
1



Use multiplication to count how many shapes there are

a	0	b	27
c	3	d	12
e	2,700	f	30

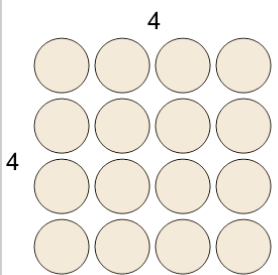
3



Use multiplication to count how many shapes there are

a	0	b	900
c	11	d	9
e	6	f	8

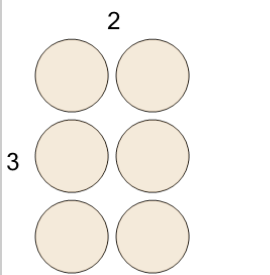
4



Use multiplication to count how many shapes there are

a	13	b	16
c	18	d	1,600
e	160	f	19

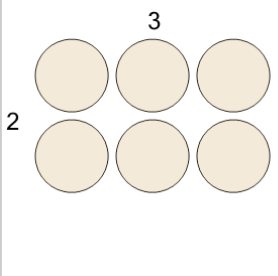
5



Use multiplication to count how many shapes there are

a	0	b	60
c	6	d	600
e	7	f	5

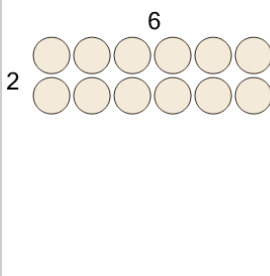
6



Use multiplication to count how many shapes there are

a	7	b	600
c	0	d	5
e	6	f	1

7



Use multiplication to count how many shapes there are

a	12	b	1
c	120	d	10
e	8	f	13