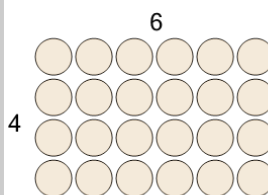




Math worksheet on 'Multiplication - From Model to Answer (Level 3)'. Part of a broader unit on 'Multiplication - 1 and 2 Digit - Practice'

Learn online: app.mobius.academy/math/units/multiplication_1_and_2_digit/

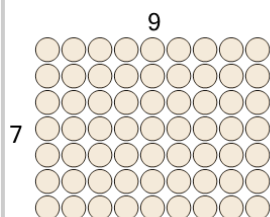
1



Use multiplication to count how many shapes there are

| | | | |
|----------|-------|----------|----|
| a | 240 | b | 10 |
| c | 2,400 | d | 24 |
| e | 27 | f | 26 |

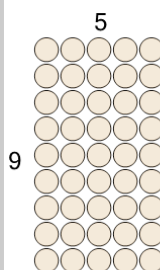
2



Use multiplication to count how many shapes there are

| | | | |
|----------|----|----------|----|
| a | 72 | b | 6 |
| c | 16 | d | 59 |
| e | 51 | f | 63 |

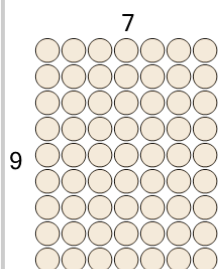
3



Use multiplication to count how many shapes there are

| | | | |
|----------|----|----------|-----|
| a | 52 | b | 42 |
| c | 14 | d | 450 |
| e | 45 | f | 0 |


4



Use multiplication to count how many shapes there are

| | | | |
|----------|----|----------|----|
| a | 63 | b | 64 |
| c | 62 | d | 1 |
| e | 16 | f | 61 |

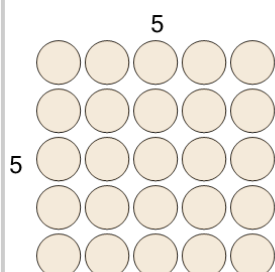
5



Use multiplication to count how many shapes there are

| | | | |
|----------|----|----------|----|
| a | 48 | b | 0 |
| c | 49 | d | 14 |
| e | 50 | f | 45 |

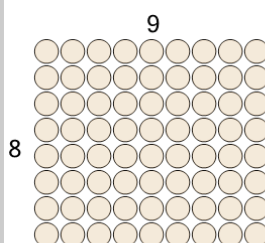
6



Use multiplication to count how many shapes there are

| | | | |
|----------|----|----------|----|
| a | 30 | b | 28 |
| c | 0 | d | 24 |
| e | 25 | f | 22 |

7



Use multiplication to count how many shapes there are

| | | | |
|----------|----|----------|-------|
| a | 63 | b | 69 |
| c | 72 | d | 7,200 |
| e | 17 | f | 83 |