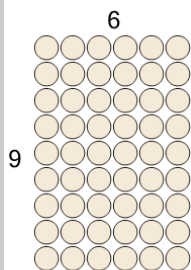




Math worksheet on 'Multiplication - From Model to Equation (Level 3)'. Part of a broader unit on 'Multiplication - 1 and 2 Digit - Practice'

Learn online: app.mobius.academy/math/units/multiplication_1_and_2_digit/

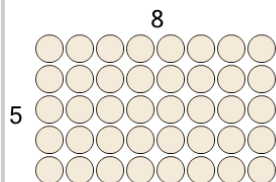
1



What multiplication equation would help you count the shapes

- | | | | |
|---|--------------|---|--------------|
| a | 5×4 | b | 5×7 |
| c | 7×7 | d | 6×3 |
| e | 6×9 | f | 3×5 |

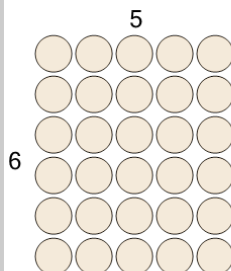
2



What multiplication equation would help you count the shapes

- | | | | |
|---|--------------|---|--------------|
| a | 2×3 | b | 5×7 |
| c | 3×4 | d | 7×7 |
| e | 4×5 | f | 8×5 |


3



What multiplication equation would help you count the shapes

- | | | | |
|---|--------------|---|--------------|
| a | 7×6 | b | 5×5 |
| c | 5×6 | d | 6×6 |
| e | 4×7 | f | 4×5 |


4



What multiplication equation would help you count the shapes

- | | | | |
|---|--------------|---|--------------|
| a | 6×6 | b | 7×6 |
| c | 4×4 | d | 4×7 |
| e | 5×7 | f | 3×7 |

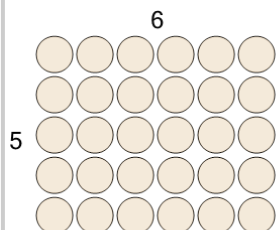
5



What multiplication equation would help you count the shapes

- | | | | |
|---|--------------|---|--------------|
| a | 2×3 | b | 5×8 |
| c | 6×6 | d | 5×2 |
| e | 4×3 | f | 6×3 |

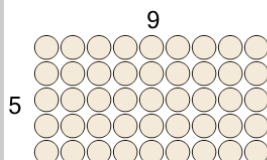
6



What multiplication equation would help you count the shapes

- | | | | |
|---|--------------|---|--------------|
| a | 6×5 | b | 2×6 |
| c | 2×3 | d | 5×5 |
| e | 2×5 | f | 7×2 |

7



What multiplication equation would help you count the shapes

- | | | | |
|---|--------------|---|--------------|
| a | 5×4 | b | 3×3 |
| c | 9×5 | d | 7×4 |
| e | 2×4 | f | 2×5 |