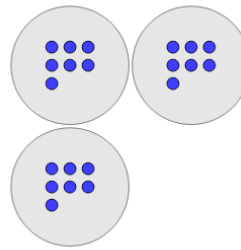




Math worksheet on 'Multiplication - From Picture to Answer (Level 2)'. Part of a broader unit on 'Multiplication of Integers - Intro'

Learn online: app.mobius.academy/math/units/multiplication_integers_1_digit_intro/

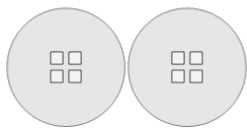
1



Use multiplication to count how many circles there are in total

a	25	b	210
c	21	d	24
e	10	f	2,100

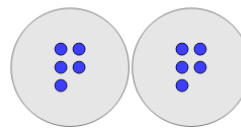
2



Use multiplication to count how many squares there are in total

a	8	b	80
c	800	d	6
e	7	f	0

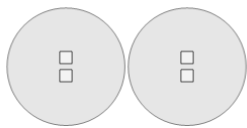
3



Use multiplication to count how many circles there are in total

a	1	b	100
c	10	d	7
e	11	f	9

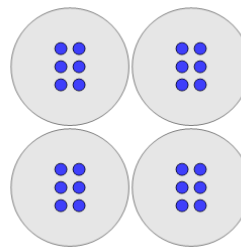
4



Use multiplication to count how many squares there are in total

a	0	b	5
c	400	d	4
e	3		

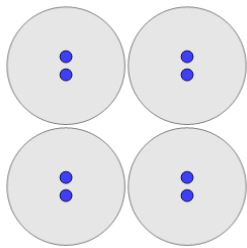
5



Use multiplication to count how many circles there are in total

a	22	b	10
c	24	d	27
e	2	f	240

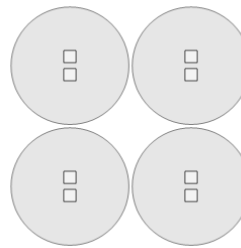
6



Use multiplication to count how many circles there are in total

a	1	b	7
c	6	d	9
e	8	f	800

7



Use multiplication to count how many squares there are in total

a	0	b	1
c	6	d	80
e	7	f	8