




Math worksheet on 'Multiplication - From Picture to Answer (Level 3)'. Part of a broader unit on 'Multiplication of Integers - Intro'

Learn online: app.mobius.academy/math/units/multiplication_integers_1_digit_intro/

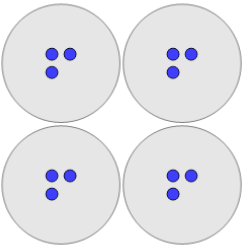
1



Use multiplication to count how many squares there are in total

a	0	b	1,200
c	120	d	12
e	8	f	13

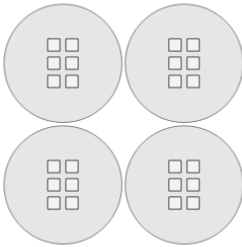
2



Use multiplication to count how many circles there are in total

a	0	b	12
c	13	d	11
e	120	f	7

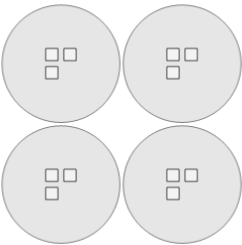
3



Use multiplication to count how many squares there are in total

a	22	b	23
c	24	d	25
e	21	f	10

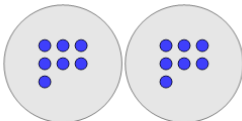
4



Use multiplication to count how many squares there are in total

a	1	b	12
c	14	d	0
e	7	f	13

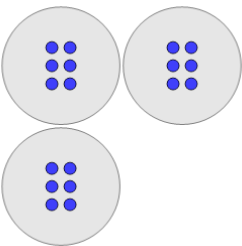
5



Use multiplication to count how many circles there are in total

a	13	b	12
c	140	d	14
e	9	f	15

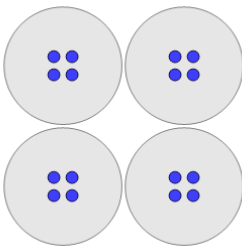
6



Use multiplication to count how many circles there are in total

a	17	b	2
c	15	d	18
e	1,800	f	16

7



Use multiplication to count how many circles there are in total

a	16	b	15
c	14	d	8
e	13	f	160