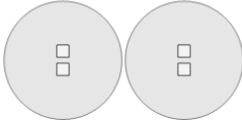




Math worksheet on 'Multiplication - From Picture to Equation (Level 2)'. Part of a broader unit on 'Multiplication of Integers - Intro'

Learn online: [app.mobius.academy/math/units/multiplication\\_integers\\_1\\_digit\\_intro/](http://app.mobius.academy/math/units/multiplication_integers_1_digit_intro/)

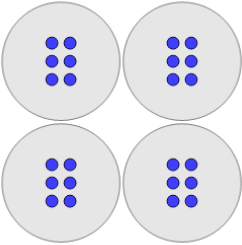
**1**



What multiplication equation would help you count the squares

<b>a</b>	$6 \times 5$	<b>b</b>	$2 \times 2$
<b>c</b>	$5 \times 4$	<b>d</b>	$3 \times 7$
<b>e</b>	$7 \times 4$	<b>f</b>	$5 \times 2$

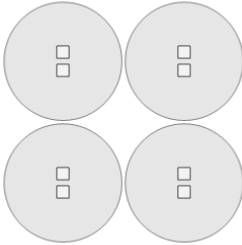
**2**



What multiplication equation would help you count the circles

<b>a</b>	$7 \times 7$	<b>b</b>	$3 \times 6$
<b>c</b>	$2 \times 3$	<b>d</b>	$7 \times 3$
<b>e</b>	$4 \times 6$	<b>f</b>	$6 \times 5$

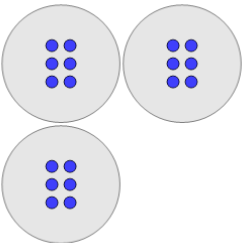
**3**



What multiplication equation would help you count the squares

<b>a</b>	$7 \times 6$	<b>b</b>	$5 \times 6$
<b>c</b>	$4 \times 4$	<b>d</b>	$4 \times 2$
<b>e</b>	$5 \times 2$	<b>f</b>	$7 \times 5$

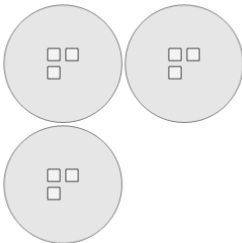
**4**



What multiplication equation would help you count the circles

<b>a</b>	$3 \times 6$	<b>b</b>	$5 \times 6$
<b>c</b>	$5 \times 2$	<b>d</b>	$3 \times 4$
<b>e</b>	$6 \times 5$	<b>f</b>	$7 \times 4$

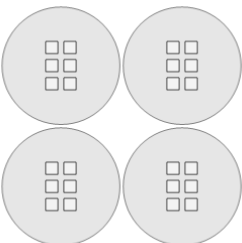
**5**



What multiplication equation would help you count the squares

<b>a</b>	$5 \times 7$	<b>b</b>	$5 \times 6$
<b>c</b>	$3 \times 4$	<b>d</b>	$5 \times 4$
<b>e</b>	$3 \times 3$	<b>f</b>	$2 \times 2$

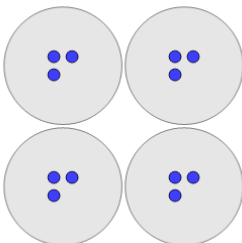
**6**



What multiplication equation would help you count the squares

<b>a</b>	$7 \times 4$	<b>b</b>	$4 \times 5$
<b>c</b>	$7 \times 2$	<b>d</b>	$4 \times 6$
<b>e</b>	$5 \times 5$	<b>f</b>	$7 \times 7$

**7**



What multiplication equation would help you count the circles

<b>a</b>	$4 \times 3$	<b>b</b>	$7 \times 2$
<b>c</b>	$6 \times 7$	<b>d</b>	$6 \times 6$
<b>e</b>	$2 \times 2$	<b>f</b>	$5 \times 5$