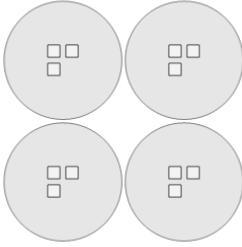




Math worksheet on 'Multiplication - From Picture to Equation (Level 3)'. Part of a broader unit on 'Multiplication of Integers - Intro'

Learn online: app.mobius.academy/math/units/multiplication_integers_1_digit_intro/

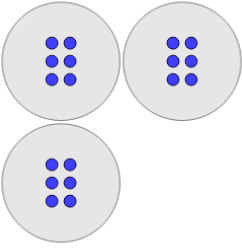
1



What multiplication equation would help you count the squares

a	4×3	b	4×6
c	2×6	d	6×2
e	2×4	f	6×5

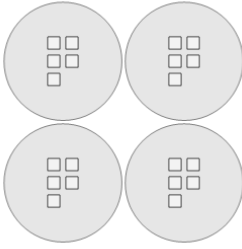
2



What multiplication equation would help you count the circles

a	5×6	b	5×2
c	3×6	d	7×4
e	3×4	f	6×5

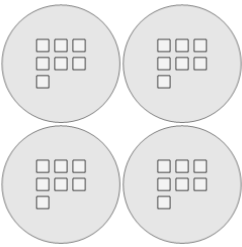
3



What multiplication equation would help you count the squares

a	4×5	b	2×5
c	4×6	d	6×4
e	6×2	f	2×3

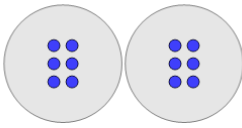
4



What multiplication equation would help you count the squares

a	2×4	b	4×7
c	7×7	d	6×2
e	8×4	f	3×4

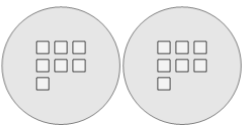
5



What multiplication equation would help you count the circles

a	4×7	b	5×7
c	3×2	d	3×6
e	2×6	f	4×5

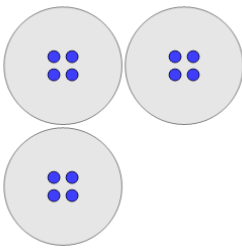
6



What multiplication equation would help you count the squares

a	5×4	b	2×4
c	7×7	d	6×2
e	2×7	f	7×4

7



What multiplication equation would help you count the circles

a	7×5	b	3×6
c	4×4	d	7×7
e	3×4	f	7×4