

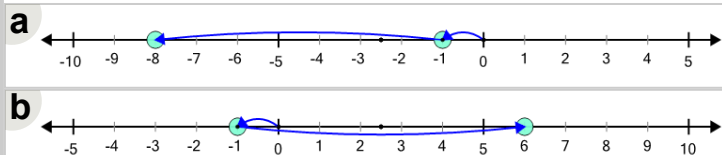


Math worksheet on 'Number Line - Addition Negative Integers, Equation to Movement Image (Level 1)'.
Part of a broader unit on 'Negative Integers - Practice'

Learn online: app.mobius.academy/math/units/negative_integers_practice/

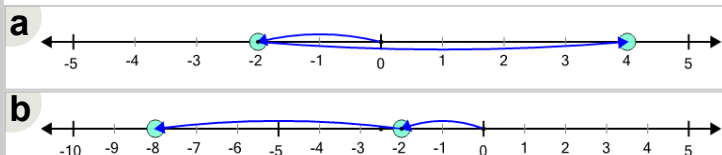
2 Which number line shows this addition equation?

$$(-1) + (-7) = -8$$

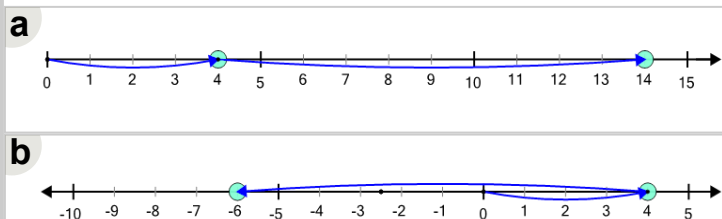


4 Which number line shows this addition equation?

$$(-2) + (-6) = -8$$

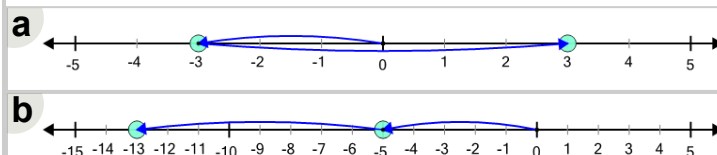


6 Which number line shows this addition equation? $4 + (-10) = -6$

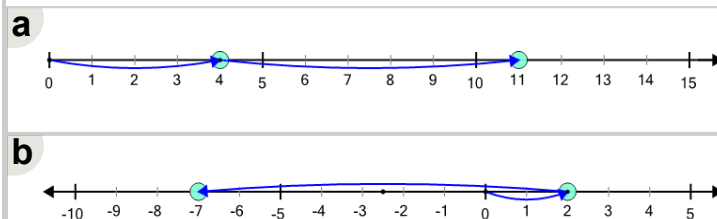


1 Which number line shows this addition equation?

$$(-5) + (-8) = -13$$

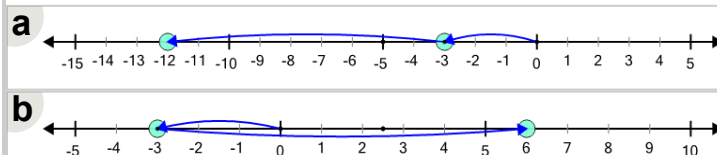


3 Which number line shows this addition equation? $2 + (-9) = -7$



5 Which number line shows this addition equation?

$$(-3) + (-9) = -12$$



7 Which number line shows this addition equation? $7 + (-4) = 3$

