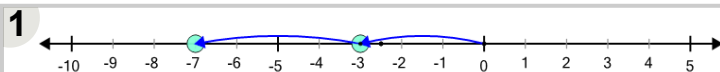




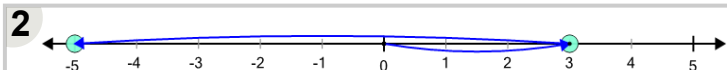
Math worksheet on 'Number Line - Addition Negative Integers, Movement Image to Answer (Level 1)'. Part of a broader unit on 'Negative Integers - Practice'

Learn online: app.mobius.academy/math/units/negative_integers_practice/



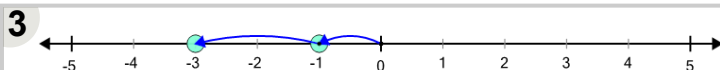
What number does the addition $-3 + -4$ land on?

- | | | | | | |
|---|---|----|---|---|----|
| a | b | c | d | e | f |
| 3 | 4 | -7 | 0 | 1 | -2 |



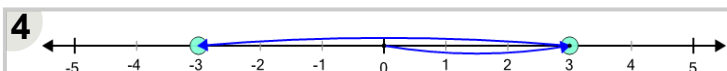
What number does the addition $3 + -8$ land on?

- | | | | | | |
|---|----|----|---|---|----|
| a | b | c | d | e | f |
| 2 | -2 | -5 | 3 | 0 | -3 |



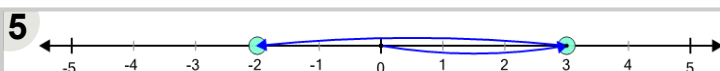
What number does the addition $-1 + -2$ land on?

- | | | | | | |
|---|----|----|----|---|---|
| a | b | c | d | e | f |
| 1 | -5 | -1 | -3 | 4 | 0 |



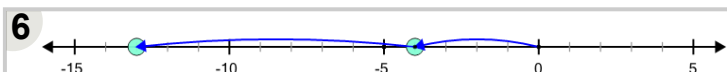
What number does the addition $3 + -6$ land on?

- | | | | | | |
|---|---|---|----|----|----|
| a | b | c | d | e | f |
| 1 | 4 | 0 | -3 | -5 | -1 |



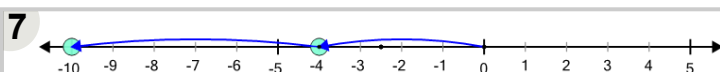
What number does the addition $3 + -5$ land on?

- | | | | |
|---|---|---|----|
| a | b | c | d |
| 0 | 1 | 3 | -2 |



What number does the addition $-4 + -9$ land on?

- | | | | | | |
|----|----|-----|----|----|----|
| a | b | c | d | e | f |
| -9 | -3 | -13 | -6 | -2 | -5 |



What number does the addition $-4 + -6$ land on?

- | | | | | | |
|----|----|----|---|---|-----|
| a | b | c | d | e | f |
| -4 | -5 | -2 | 2 | 0 | -10 |