



Math worksheet on 'Number Line - Addition Positive Integers, Equation to Movement Image (Level 1)'.
Part of a broader unit on 'Addition and Subtraction of Integers - 1 and 2 Digit'

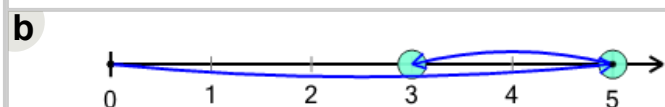
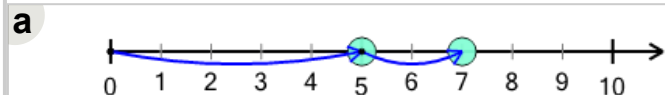
Learn online:

app.mobius.academy/math/units/addition_and_subtraction_integers_1_and_2_digit/

2

Which number line shows this addition equation?

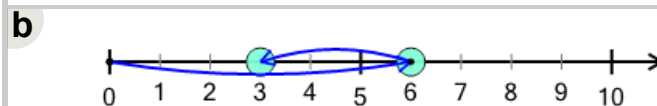

$$5 + 2 = 7$$



1

Which number line shows this addition equation?

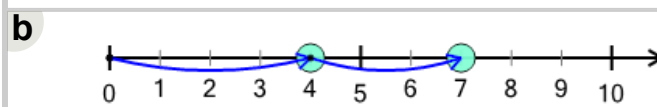
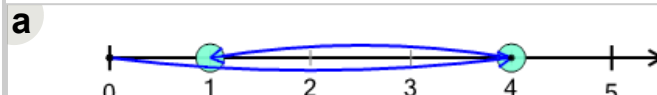
$$6 + 3 = 9$$



3

Which number line shows this addition equation?

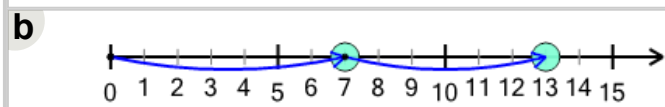
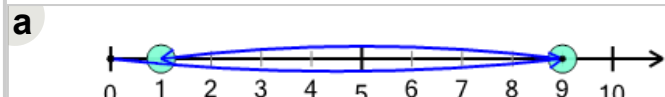
$$4 + 3 = 7$$



4

Which number line shows this addition equation?

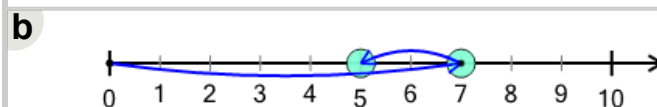
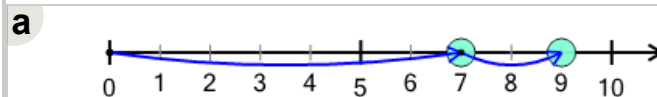
$$7 + 6 = 13$$



5

Which number line shows this addition equation?

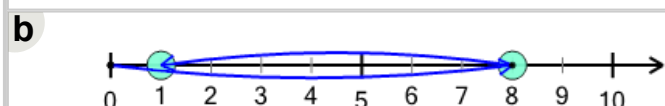
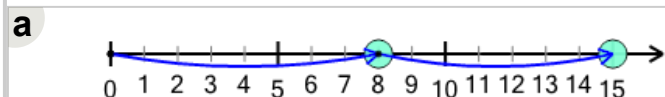
$$7 + 2 = 9$$



6

Which number line shows this addition equation?

$$8 + 7 = 15$$



7

Which number line shows this addition equation?

$$9 + 2 = 11$$

