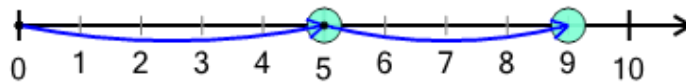




Math worksheet on 'Number Line - Addition Positive Integers, Movement Image to Answer (Level 1)'. Part of a broader unit on 'Number Sense - Intro'

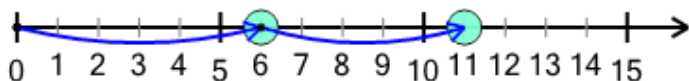
Learn online: app.mobius.academy/math/units/number_sense_intro/

1 What number does the addition $5 + 4 = 9$ land on?



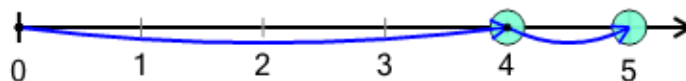
- | | | | | |
|----------|----------|----------|----------|----------|
| a | b | c | d | e |
| 9 | 6 | 5 | 4 | 3 |

2 What number does the addition $6 + 5 = 11$ land on?



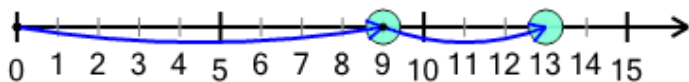
- | | | | | |
|----------|----------|----------|----------|----------|
| a | b | c | d | e |
| 7 | 11 | 3 | 8 | 14 |

3 What number does the addition $4 + 1 = 5$ land on?



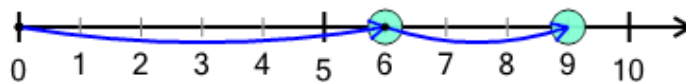
- | | | | | |
|----------|----------|----------|----------|----------|
| a | b | c | d | e |
| 0 | 2 | 1 | 5 | 3 |

4 What number does the addition $9 + 4 = 13$ land on?



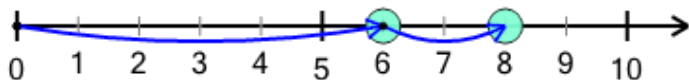
- | | | | | | |
|----------|----------|----------|----------|----------|----------|
| a | b | c | d | e | f |
| 4 | 9 | 13 | 10 | 8 | 0 |

5 What number does the addition $6 + 3 = 9$ land on?



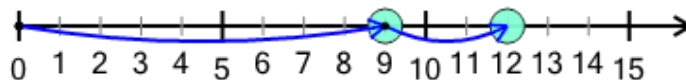
- | | | | | | |
|----------|----------|----------|----------|----------|----------|
| a | b | c | d | e | f |
| 6 | 4 | 5 | 7 | 9 | 3 |

6 What number does the addition $6 + 2 = 8$ land on?



- | | | | | |
|----------|----------|----------|----------|----------|
| a | b | c | d | e |
| 6 | 4 | 8 | 1 | 2 |

7 What number does the addition $9 + 3 = 12$ land on?



- | | | | | | |
|----------|----------|----------|----------|----------|----------|
| a | b | c | d | e | f |
| 2 | 14 | 4 | 0 | 12 | 1 |