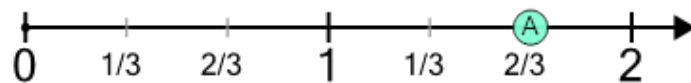




Math worksheet on 'Number Line - Improper Fractions, Read Number - Labelled (Level 1)'. Part of a broader unit on 'Fraction Foundations - Practice'

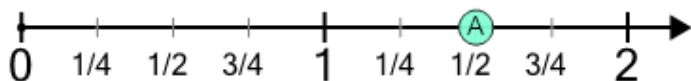
Learn online: app.mobius.academy/math/units/fractions_foundations_practice/

1 What fraction does this dot represent?



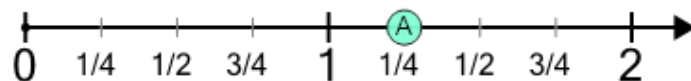
- | | | | | | |
|-----------------|-----------------|------------------|-----------------|-----------------|-----------------|
| a $\frac{2}{6}$ | b $\frac{5}{6}$ | c $\frac{10}{9}$ | d $\frac{5}{5}$ | e $\frac{5}{3}$ | f $\frac{3}{4}$ |
|-----------------|-----------------|------------------|-----------------|-----------------|-----------------|

2 What fraction does this dot represent?



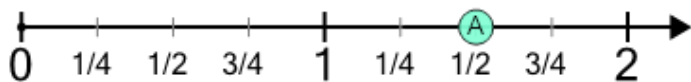
- | | | | | | |
|-----------------|-----------------|-----------------|-----------------|-----------------|-----------------|
| a $\frac{5}{6}$ | b $\frac{3}{2}$ | c $\frac{3}{4}$ | d $\frac{5}{3}$ | e $\frac{7}{7}$ | f $\frac{2}{7}$ |
|-----------------|-----------------|-----------------|-----------------|-----------------|-----------------|

3 What fraction does this dot represent?



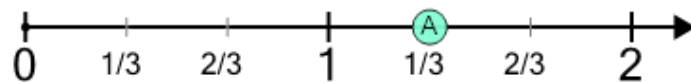
- | | | | | | |
|------------------|-----------------|-----------------|------------------|-----------------|------------------|
| a $\frac{2}{10}$ | b $\frac{5}{4}$ | c $\frac{3}{5}$ | d $\frac{11}{8}$ | e $\frac{8}{8}$ | f $\frac{10}{7}$ |
|------------------|-----------------|-----------------|------------------|-----------------|------------------|

4 What fraction does this dot represent?



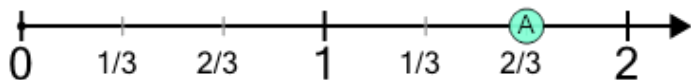
- | | | | | | |
|-----------------|-----------------|-----------------|-----------------|-----------------|-----------------|
| a $\frac{2}{4}$ | b $\frac{2}{3}$ | c $\frac{6}{3}$ | d $\frac{3}{7}$ | e $\frac{3}{2}$ | f $\frac{5}{3}$ |
|-----------------|-----------------|-----------------|-----------------|-----------------|-----------------|

5 What fraction does this dot represent?



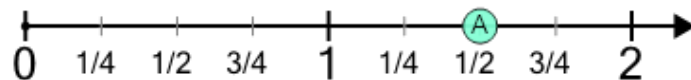
- | | | | | | |
|-----------------|-----------------|-----------------|-----------------|-----------------|-----------------|
| a $\frac{6}{7}$ | b $\frac{1}{4}$ | c $\frac{6}{4}$ | d $\frac{7}{6}$ | e $\frac{3}{7}$ | f $\frac{4}{3}$ |
|-----------------|-----------------|-----------------|-----------------|-----------------|-----------------|

6 What fraction does this dot represent?



- | | | | | | |
|-----------------|-----------------|-----------------|-----------------|-----------------|-----------------|
| a $\frac{4}{5}$ | b $\frac{3}{9}$ | c $\frac{7}{3}$ | d $\frac{1}{8}$ | e $\frac{5}{3}$ | f $\frac{3}{5}$ |
|-----------------|-----------------|-----------------|-----------------|-----------------|-----------------|

7 What fraction does this dot represent?



- | | | | | | |
|-----------------|-----------------|-----------------|-----------------|-----------------|-----------------|
| a $\frac{1}{6}$ | b $\frac{1}{7}$ | c $\frac{1}{7}$ | d $\frac{3}{2}$ | e $\frac{7}{5}$ | f $\frac{5}{4}$ |
|-----------------|-----------------|-----------------|-----------------|-----------------|-----------------|