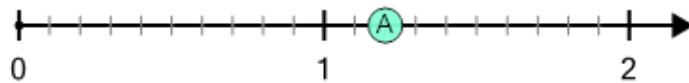




Math worksheet on 'Number Line - Large Decimals, Read Number - From Ticks (Level 1)'. Part of a broader unit on 'Decimal Foundations - Advanced'

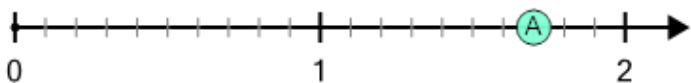
Learn online: app.mobius.academy/math/units/decimals_foundations_advanced/

1 What decimal does this dot represent?



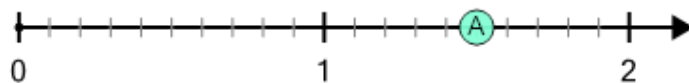
- | | | | | | |
|-----|-----|-----|-----|-----|-----|
| a | b | c | d | e | f |
| 0.6 | 2.1 | 1.6 | 1.2 | 1.4 | 0.2 |

2 What decimal does this dot represent?



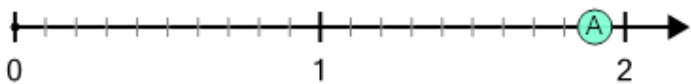
- | | | | | | |
|-----|-----|-----|-----|-----|-----|
| a | b | c | d | e | f |
| 2.5 | 2.2 | 2.1 | 1.8 | 1.7 | 1.4 |

3 What decimal does this dot represent?



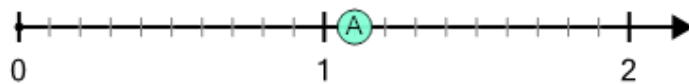
- | | | | | | |
|-----|-----|-----|-----|-----|---|
| a | b | c | d | e | f |
| 0.5 | 2.1 | 0.5 | 1.1 | 1.5 | 1 |

4 What decimal does this dot represent?



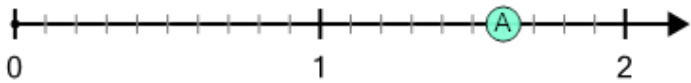
- | | | | | | |
|-----|---|-----|-----|-----|-----|
| a | b | c | d | e | f |
| 1.9 | 1 | 1.5 | 1.3 | 2.3 | 1.7 |

5 What decimal does this dot represent?



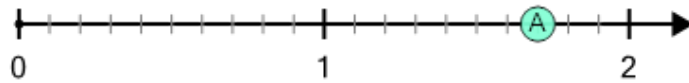
- | | | | | | |
|-----|-----|-----|-----|---|-----|
| a | b | c | d | e | f |
| 1.5 | 1.6 | 0.4 | 1.8 | 2 | 1.1 |

6 What decimal does this dot represent?



- | | | | | | |
|-----|-----|-----|-----|-----|-----|
| a | b | c | d | e | f |
| 0.6 | 1.6 | 2.1 | 1.9 | 2.3 | 2.2 |

7 What decimal does this dot represent?



- | | | | | | |
|-----|-----|-----|-----|-----|-----|
| a | b | c | d | e | f |
| 1.2 | 1.7 | 0.8 | 2.3 | 0.7 | 1.1 |