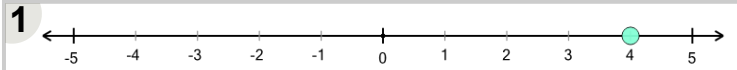




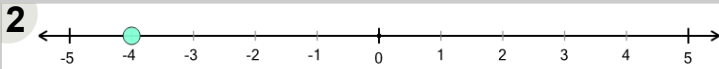
Math worksheet on 'Number Line - Negative Integers, Read Number - Labelled (Level 1)'. Part of a broader unit on 'Negative Integers - Intro'

Learn online: app.mobius.academy/math/units/negative_integers_intro/



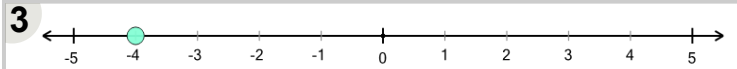
What number does this dot represent?

a	b	c	d	e	f
-1	-2	4	0	-5	2



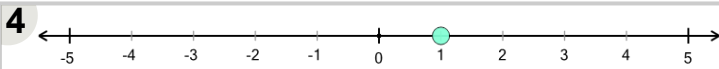
What number does this dot represent?

a	b	c	d
3	2	-2	-4



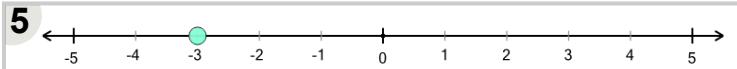
What number does this dot represent?

a	b	c	d	e
0	-2	4	-4	-1



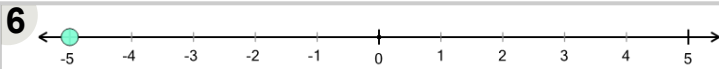
What number does this dot represent?

a	b	c	d
-3	3	-4	1



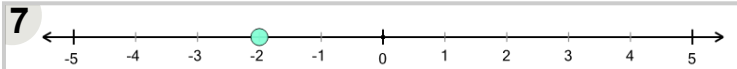
What number does this dot represent?

a	b	c	d
-3	-1	4	1



What number does this dot represent?

a	b	c	d	e	f
-2	1	-1	2	0	-5



What number does this dot represent?

a	b	c	d	e
-5	3	0	2	-2