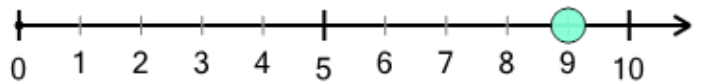




Math worksheet on 'Number Line - Positive Integers, Read Number - Labelled (Level 1)'. Part of a broader unit on 'Number Sense - Basics'

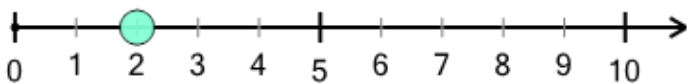
Learn online: app.mobius.academy/math/units/number_sense_basics/

1 What number does this dot represent?



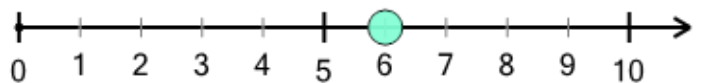
a	b	c	d	e	f
9	3	2	5	6	4

2 What number does this dot represent?



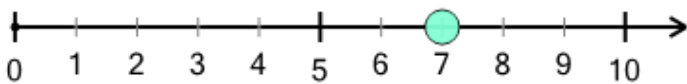
a	b	c	d	e
2	6	5	4	8

3 What number does this dot represent?



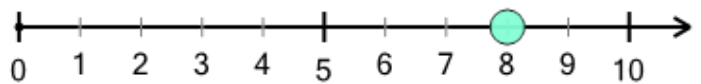
a	b	c	d	e	f
3	2	8	6	0	1

4 What number does this dot represent?



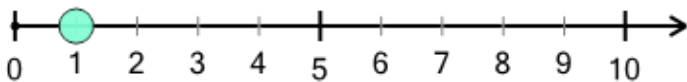
a	b	c	d	e
7	5	9	3	2

5 What number does this dot represent?



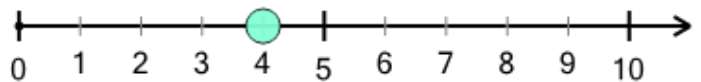
a	b	c	d	e
1	0	3	4	8

6 What number does this dot represent?



a	b	c	d	e	f
1	5	9	6	3	7

7 What number does this dot represent?



a	b	c	d
7	4	1	6