

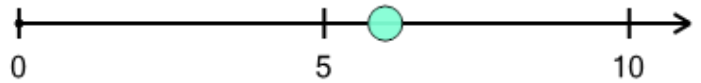


Math worksheet on 'Number Line - Positive Integers, Read Number - Approximate (Level 1)'. Part of a broader unit on 'Number Sense - Basics'

Learn online: app.mobius.academy/math/units/number_sense_basics/

1

What number would this dot be closest to?



a

3

b

4

c

2

d

9

e

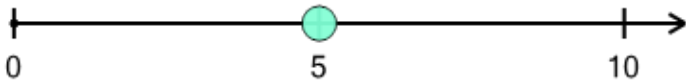
0

f

6

2

What number would this dot be closest to?



a

2

b

8

c

1

d

5

e

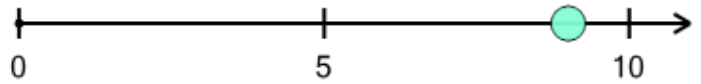
9

f

3

3

What number would this dot be closest to?



a

9

b

2

c

1

d

5

e

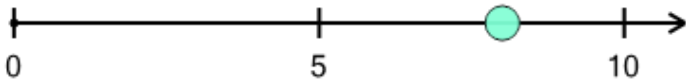
7

f

6

4

What number would this dot be closest to?



a

8

b

6

c

3

d

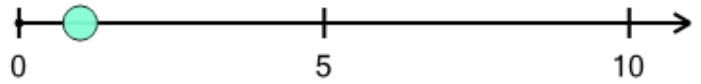
0

e

1

5

What number would this dot be closest to?



a

1

b

9

c

3

d

6

e

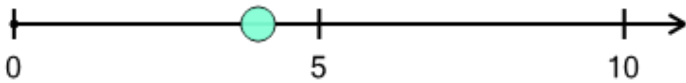
7

f

4

6

What number would this dot be closest to?



a

6

b

2

c

0

d

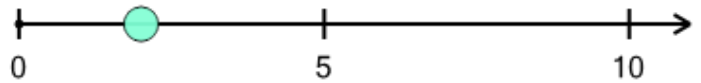
4

e

9

7

What number would this dot be closest to?



a

0

b

6

c

9

d

5

e

8

f

2