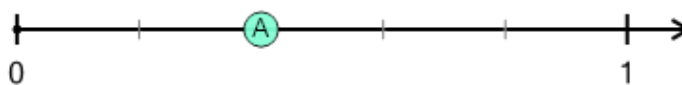




Math worksheet on 'Number Line - Simple Fractions, Read Number - From Ticks (Level 1)'. Part of a broader unit on 'Fraction Foundations - Intro'

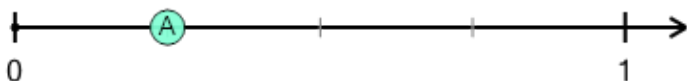
Learn online: app.mobius.academy/math/units/fractions_foundations_intro/

1 What fraction does this dot represent?



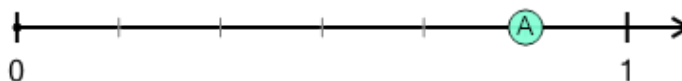
- | | | | | | | | | | | | |
|---|---------------|---|---------------|---|----------------|---|---------------|---|---------------|---|----------------|
| a | $\frac{5}{4}$ | b | $\frac{2}{5}$ | c | $\frac{4}{12}$ | d | $\frac{3}{8}$ | e | $\frac{1}{8}$ | f | $\frac{4}{12}$ |
|---|---------------|---|---------------|---|----------------|---|---------------|---|---------------|---|----------------|

2 What fraction does this dot represent?



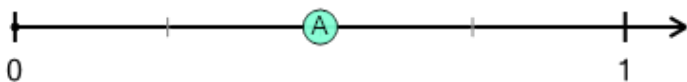
- | | | | | | | | | | | | |
|---|---------------|---|---------------|---|---------------|---|---------------|---|----------------|---|---------------|
| a | $\frac{2}{6}$ | b | $\frac{1}{3}$ | c | $\frac{1}{4}$ | d | $\frac{2}{3}$ | e | $\frac{1}{11}$ | f | $\frac{2}{3}$ |
|---|---------------|---|---------------|---|---------------|---|---------------|---|----------------|---|---------------|

3 What fraction does this dot represent?



- | | | | | | | | | | | | |
|---|----------------|---|----------------|---|---------------|---|---------------|---|---------------|---|----------------|
| a | $\frac{8}{14}$ | b | $\frac{2}{15}$ | c | $\frac{8}{9}$ | d | $\frac{5}{6}$ | e | $\frac{4}{7}$ | f | $\frac{4}{11}$ |
|---|----------------|---|----------------|---|---------------|---|---------------|---|---------------|---|----------------|

4 What fraction does this dot represent?



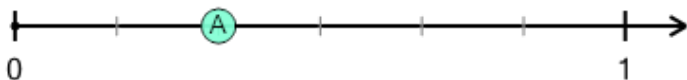
- | | | | | | | | | | | | |
|---|---------------|---|---------------|---|---------------|---|---------------|---|---------------|---|---------------|
| a | $\frac{2}{5}$ | b | $\frac{2}{7}$ | c | $\frac{1}{4}$ | d | $\frac{2}{7}$ | e | $\frac{1}{6}$ | f | $\frac{1}{2}$ |
|---|---------------|---|---------------|---|---------------|---|---------------|---|---------------|---|---------------|

5 What fraction does this dot represent?



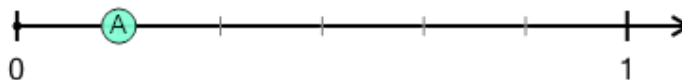
- | | | | | | | | | | | | |
|---|---------------|---|----------------|---|----------------|---|----------------|---|---------------|---|---------------|
| a | $\frac{3}{5}$ | b | $\frac{3}{13}$ | c | $\frac{5}{13}$ | d | $\frac{2}{13}$ | e | $\frac{2}{7}$ | f | $\frac{3}{7}$ |
|---|---------------|---|----------------|---|----------------|---|----------------|---|---------------|---|---------------|

6 What fraction does this dot represent?



- | | | | | | | | | | | | |
|---|---------------|---|---------------|---|---------------|---|---------------|---|---------------|---|---------------|
| a | $\frac{1}{9}$ | b | $\frac{3}{4}$ | c | $\frac{2}{8}$ | d | $\frac{3}{3}$ | e | $\frac{1}{3}$ | f | $\frac{1}{4}$ |
|---|---------------|---|---------------|---|---------------|---|---------------|---|---------------|---|---------------|

7 What fraction does this dot represent?



- | | | | | | | | | | | | |
|---|---------------|---|---------------|---|----------------|---|----------------|---|---------------|---|---------------|
| a | $\frac{1}{5}$ | b | $\frac{2}{6}$ | c | $\frac{2}{14}$ | d | $\frac{3}{10}$ | e | $\frac{1}{6}$ | f | $\frac{3}{6}$ |
|---|---------------|---|---------------|---|----------------|---|----------------|---|---------------|---|---------------|