



Math worksheet on 'Number Line - Small Decimals, Read Number - From Ticks (Level 1)'. Part of a broader unit on 'Decimal Foundations - Intro'

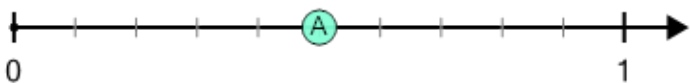
Learn online: [app.mobius.academy/math/units/decimals\\_foundations\\_intro/](http://app.mobius.academy/math/units/decimals_foundations_intro/)

1 What decimal does this dot represent?



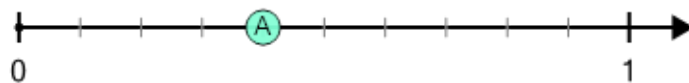
- |     |     |     |     |     |   |
|-----|-----|-----|-----|-----|---|
| a   | b   | c   | d   | e   | f |
| 0.6 | 0.5 | 1.3 | 0.8 | 1.5 | 0 |

2 What decimal does this dot represent?



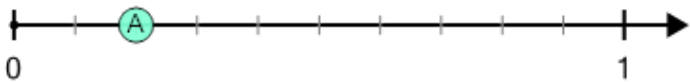
- |     |     |     |     |     |     |
|-----|-----|-----|-----|-----|-----|
| a   | b   | c   | d   | e   | f   |
| 0.4 | 0.5 | 0.9 | 0.1 | 1.1 | 0.4 |

3 What decimal does this dot represent?



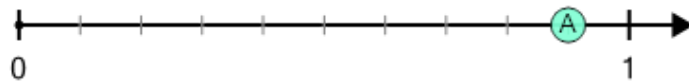
- |     |     |     |     |   |     |
|-----|-----|-----|-----|---|-----|
| a   | b   | c   | d   | e | f   |
| 1.2 | 0.4 | 0.2 | 0.7 | 1 | 1.3 |

4 What decimal does this dot represent?



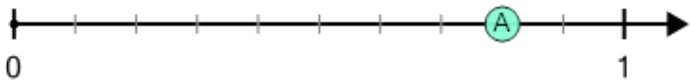
- |     |     |     |   |     |     |
|-----|-----|-----|---|-----|-----|
| a   | b   | c   | d | e   | f   |
| 0.2 | 0.8 | 0.5 | 1 | 0.5 | 1.1 |

5 What decimal does this dot represent?



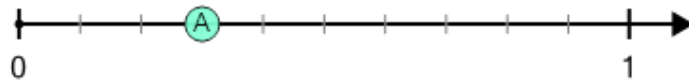
- |     |     |     |     |     |     |
|-----|-----|-----|-----|-----|-----|
| a   | b   | c   | d   | e   | f   |
| 1.2 | 0.1 | 0.8 | 1.4 | 0.9 | 0.5 |

6 What decimal does this dot represent?



- |     |     |     |     |     |     |
|-----|-----|-----|-----|-----|-----|
| a   | b   | c   | d   | e   | f   |
| 0.2 | 0.2 | 0.6 | 1.4 | 0.8 | 0.6 |

7 What decimal does this dot represent?



- |     |   |     |     |     |     |
|-----|---|-----|-----|-----|-----|
| a   | b | c   | d   | e   | f   |
| 0.6 | 1 | 0.2 | 0.2 | 1.1 | 0.3 |