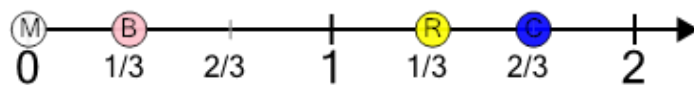




Math worksheet on 'Number Line - Improper Fractions, Select Dot - Labelled (Level 1)'. Part of a broader unit on 'Fractions - Mixed - Practice'

Learn online: [app.mobius.academy/math/units/fractions\\_practice/](http://app.mobius.academy/math/units/fractions_practice/)

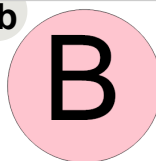
1

What dot is at  $4/3$ ?

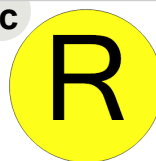
a




b



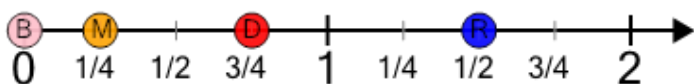
c




d



2

What dot is at  $3/2$ ?

a



b



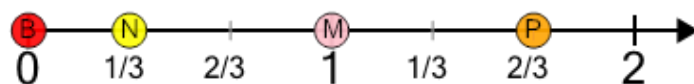
c



d



3

What dot is at  $5/3$ ?

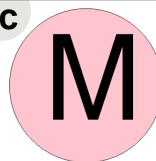
a



b



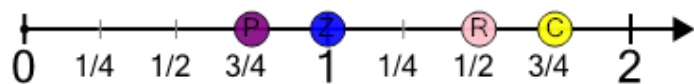
c



d



4

What dot is at  $3/2$ ?

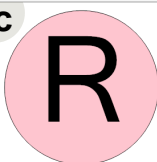
a




b



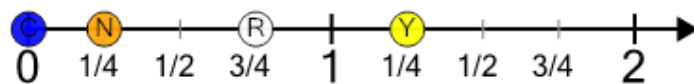
c




d



5

What dot is at  $5/4$ ?

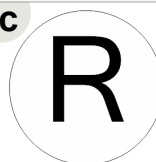
a



b



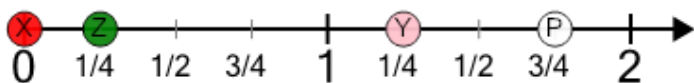
c



d



6

What dot is at  $5/4$ ?


a




b



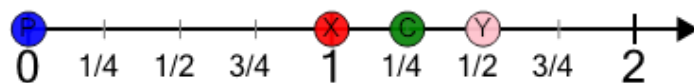
c



d



7

What dot is at  $3/2$ ?


a



b



c



d

