

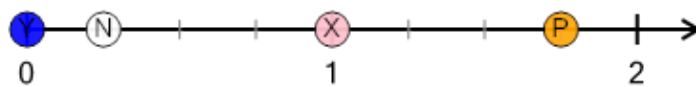


Math worksheet on 'Number Line - Improper Fractions, Select Dot - From Ticks (Level 1)'. Part of a broader unit on 'Fractions - Mixed - Practice'

Learn online: [app.mobius.academy/math/units/fractions\\_practice/](http://app.mobius.academy/math/units/fractions_practice/)

1


What dot is at  $7/4$ ?



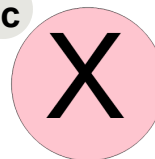
a



b



c

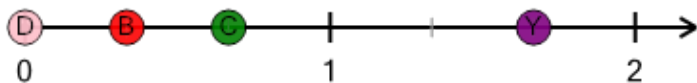


d



2

What dot is at  $5/3$ ?




a



b



c

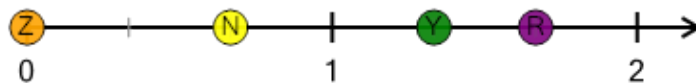


d



3


What dot is at  $4/3$ ?



a



b



c

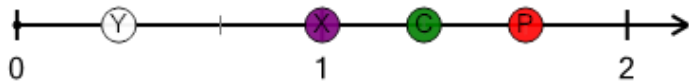


d



4

What dot is at  $4/3$ ?




a



b



c

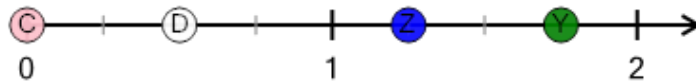


d




5

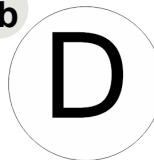
What dot is at  $5/4$ ?




a



b



c

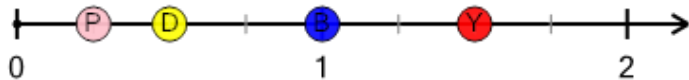


d




6


What dot is at  $3/2$ ?




a



b



c

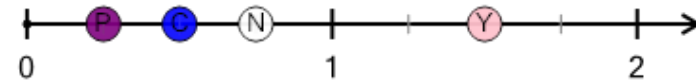


d



7


What dot is at  $3/2$ ?




a



b



c



d

