
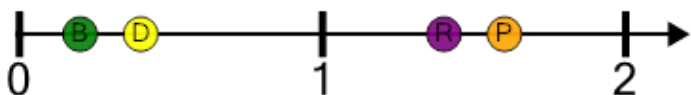




Number Line - Large Decimals, Select Dot - Approximate

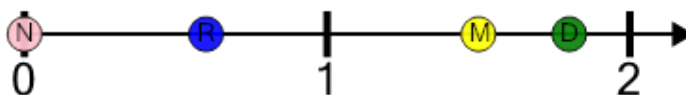


1 Which dot would be closest to 1.4?



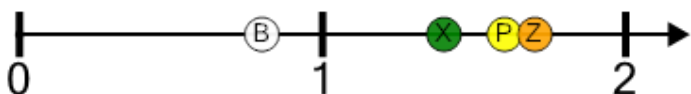
A	B	C	D
---	---	---	---

2 Which dot would be closest to 1.5?



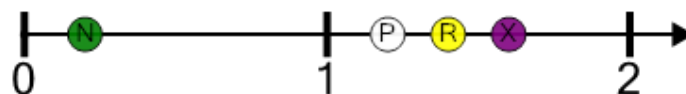
A	B	C	D
---	---	---	---

3 Which dot would be closest to 1.7?



A	B	C	D
---	---	---	---

4 Which dot would be closest to 1.6?



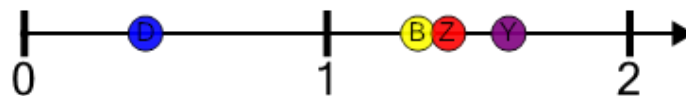
A	B	C	D
---	---	---	---

5 Which dot would be closest to 1.1?



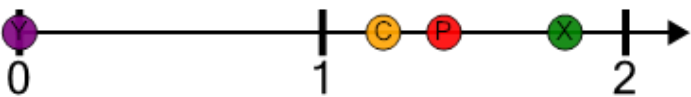
A	B	C	D
---	---	---	---

6 Which dot would be closest to 1.3?



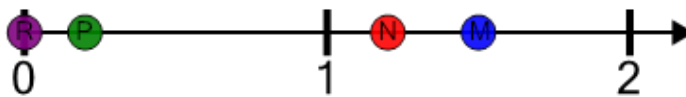
A	B	C	D
---	---	---	---

7 Which dot would be closest to 1.2?



A	B	C	D
---	---	---	---

8 Which dot would be closest to 1.5?



A	B	C	D
---	---	---	---