

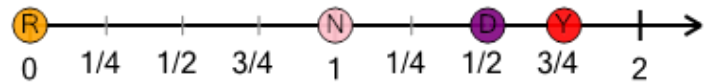


Math worksheet on 'Number Line - Mixed Fractions, Select Dot - Labelled (Level 1)'. Part of a broader unit on 'Fractions - Mixed - Practice'

Learn online: app.mobius.academy/math/units/fractions_practice/

1

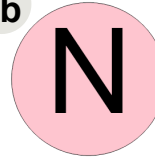
What dot is at $1 \frac{3}{4}$?




a



b



c

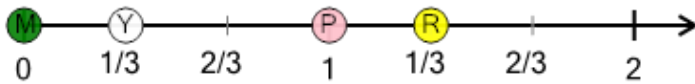


d



2

What dot is at $1 \frac{1}{3}$?



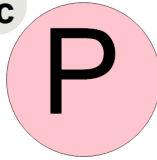
a




b



c

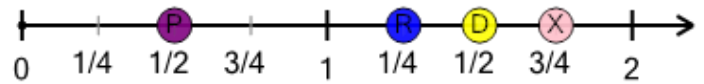


d



3


What dot is at $1 \frac{3}{4}$?




a




b



c

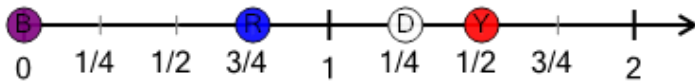


d



4


What dot is at $1 \frac{1}{4}$?



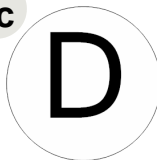
a



b



c

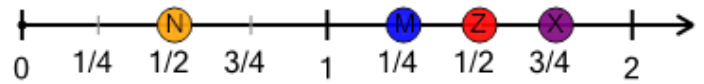


d



5


What dot is at $1 \frac{1}{2}$?




a



b



c

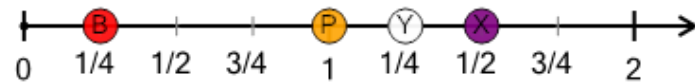


d



6

What dot is at $1 \frac{1}{2}$?




a



b



c

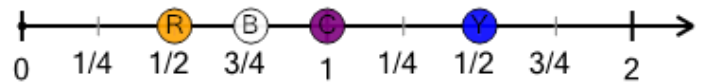


d



7

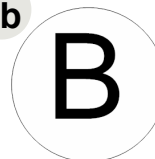
What dot is at $1 \frac{1}{2}$?




a



b



c



d

