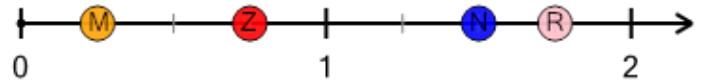




Math worksheet on 'Number Line - Mixed Fractions, Select Dot - From Ticks (Level 1)'. Part of a broader unit on 'Fractions - Mixed - Practice'

Learn online: app.mobius.academy/math/units/fractions_practice/

1

What dot is at $1 \frac{3}{4}$?


a




b



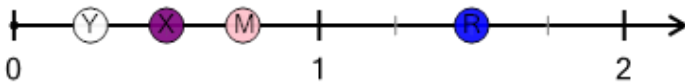
c



d



2

What dot is at $1 \frac{1}{2}$?

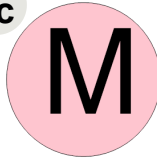
a




b



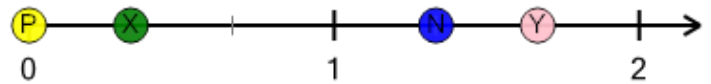
c




d




3

What dot is at $1 \frac{2}{3}$?


a




b



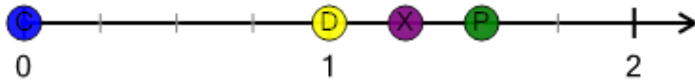
c




d




4

What dot is at $1 \frac{1}{4}$?


a



b



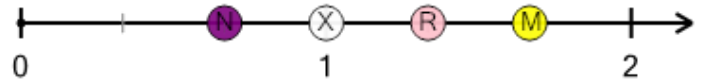
c



d



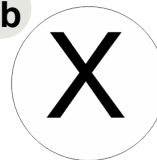
5

What dot is at $1 \frac{1}{3}$?

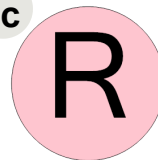
a



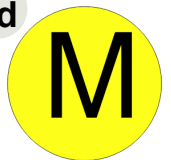
b



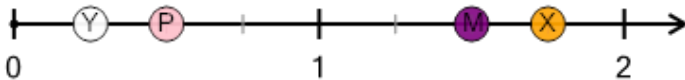
c



d



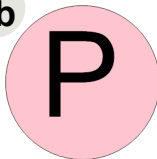
6

What dot is at $1 \frac{3}{4}$?


a



b



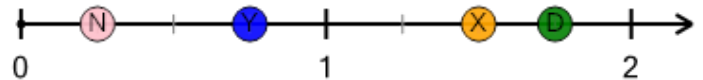
c



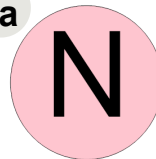
d




7

What dot is at $1 \frac{1}{2}$?

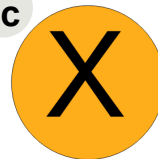
a



b



c



d

