

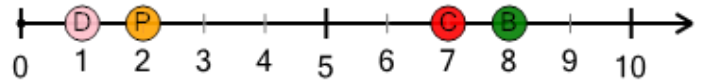


Math worksheet on 'Number Line - Positive Integers, Select Dot - Labelled (Level 1)'. Part of a broader unit on 'Number Sense - Basics'

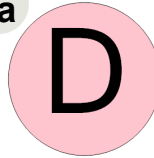
Learn online: app.mobius.academy/math/units/number_sense_basics/

1


What dot is at 1?




a



b



c

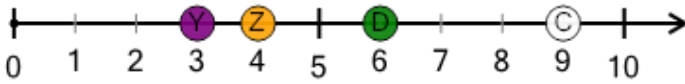


d



2

What dot is at 3?




a




b



c

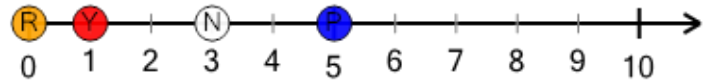


d



3


What dot is at 5?




a




b



c

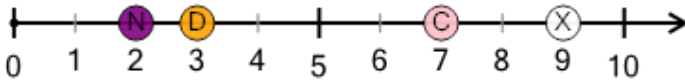


d



4

What dot is at 7?




a




b



c

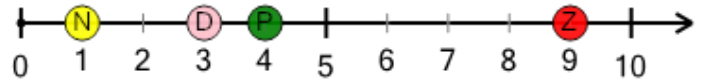


d



5

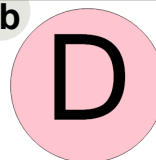
What dot is at 1?




a



b



c

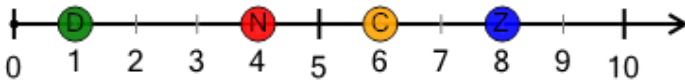


d



6


What dot is at 6?



a



b



c

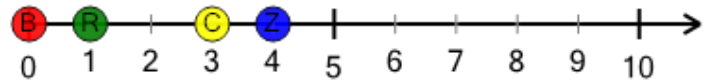


d



7

What dot is at 4?




a



b



c



d

