

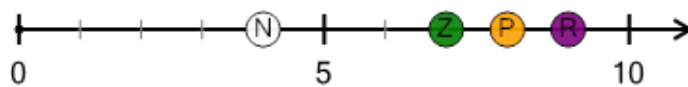


Math worksheet on 'Number Line - Positive Integers, Select Dot - From Ticks (Level 1)'. Part of a broader unit on 'Number Sense - Basics'


Learn online: [app.mobius.academy/math/units/number\\_sense\\_basics/](http://app.mobius.academy/math/units/number_sense_basics/)

1


What dot is at 9?




a



b



c



d



2

What dot is at 5?



a




b



c

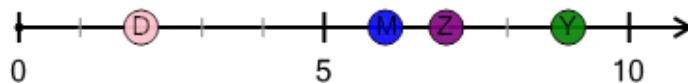


d




3


What dot is at 2?



a



b



c

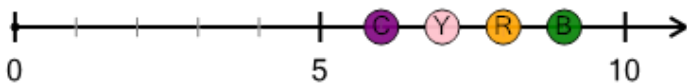


d



4

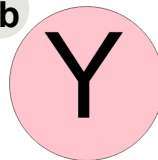
What dot is at 6?



a



b



c

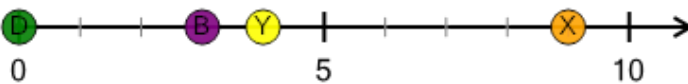


d



5


What dot is at 3?




a




b



c

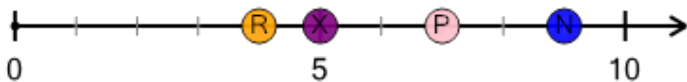


d



6


What dot is at 7?



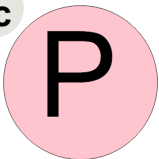
a




b



c



d



7

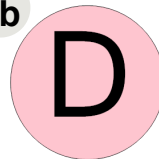
What dot is at 4?




a



b



c



d

