



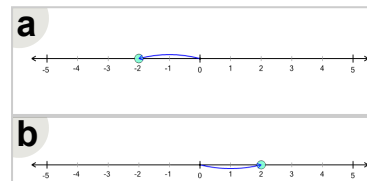
Math worksheet on 'Number Line - Single Operation with Negative Integers, Equation to Movement Image (Level 1)'. Part of a broader unit on 'Negative Integers - Intro'

Learn online: app.mobius.academy/math/units/negative_integers_intro/

1

$$+ 2$$

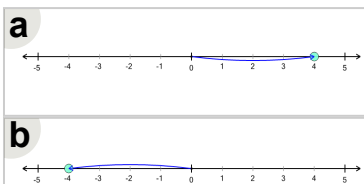
Which number line shows this operation?



2

$$- 4$$

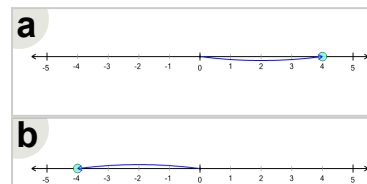
Which number line shows this operation?



3

$$+ (-4)$$

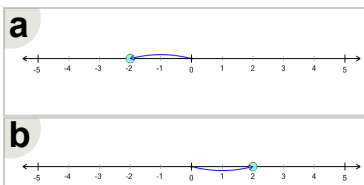
Which number line shows this operation?



4

$$- (-2)$$

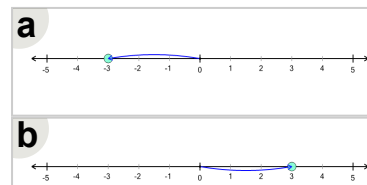
Which number line shows this operation?



5

$$+ 3$$

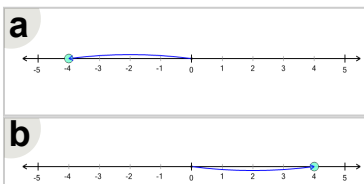
Which number line shows this operation?



6

$$- (-4)$$

Which number line shows this operation?



7

$$+ (-2)$$

Which number line shows this operation?

