



Math worksheet on 'Number Line - Subtraction Positive Integers, Equation to Movement Image (Level 1)'. Part of a broader unit on 'Addition and Subtraction of Integers - 1 Digit'

Learn online:

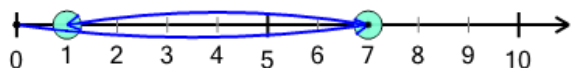
app.mobius.academy/math/units/addition_and_subtraction_integers_1_digit/

1

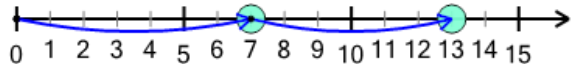
Which number line shows this subtraction equation?

$$4 - 3 = 1$$

a



b




2

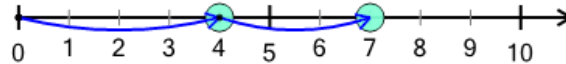
Which number line shows this subtraction equation?

$$5 - 1 = 4$$

a



b

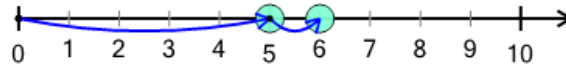


3

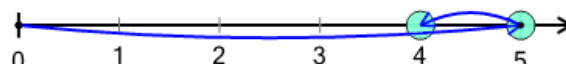
Which number line shows this subtraction equation?

$$5 - 1 = 4$$

a



b

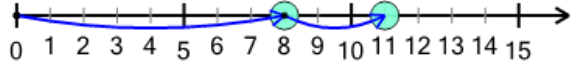


4

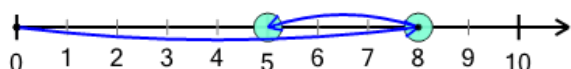
Which number line shows this subtraction equation?

$$8 - 3 = 5$$

a



b

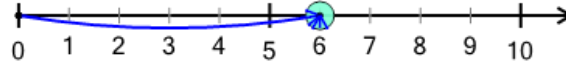


5


Which number line shows this subtraction equation?

$$4 - 2 = 2$$

a



b

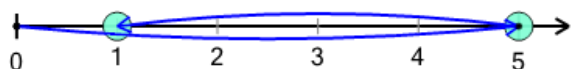


6

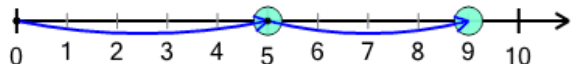
Which number line shows this subtraction equation?

$$5 - 4 = 1$$

a



b

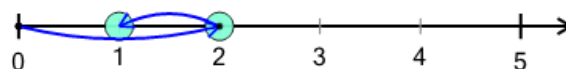


7

Which number line shows this subtraction equation?

$$2 - 1 = 1$$

a



b

