

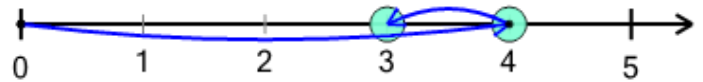


Math worksheet on 'Number Line - Subtraction Positive Integers, Movement Image to Answer (Level 1)'. Part of a broader unit on 'Addition and Subtraction of Integers - 1 and 2 Digit'

Learn online:

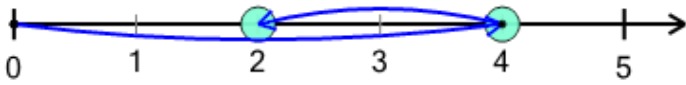
app.mobius.academy/math/units/addition_and_subtraction_integers_1_and_2_digit/

1 What number does the subtraction $4 - 1 = 3$ land on?



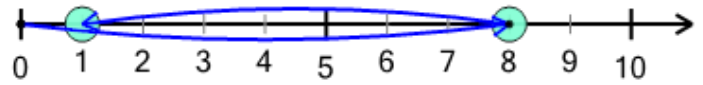
- | | | |
|----------|----------|----------|
| a | b | c |
| 0 | 1 | 3 |

2 What number does the subtraction $4 - 2 = 2$ land on?



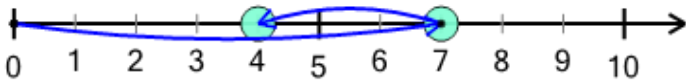
- | | | |
|----------|----------|----------|
| a | b | c |
| 4 | 2 | 0 |

3 What number does the subtraction $8 - 7 = 1$ land on?



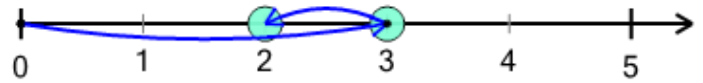
- | | | | | | |
|----------|----------|----------|----------|----------|----------|
| a | b | c | d | e | f |
| 3 | 6 | 4 | 1 | 9 | 5 |

4 What number does the subtraction $7 - 3 = 4$ land on?



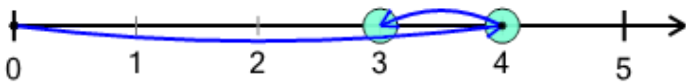
- | | | | | | |
|----------|----------|----------|----------|----------|----------|
| a | b | c | d | e | f |
| 4 | 1 | 7 | 2 | 0 | 6 |

5 What number does the subtraction $3 - 1 = 2$ land on?



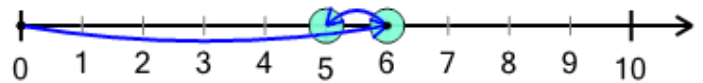
- | | |
|----------|----------|
| a | b |
| 4 | 2 |

6 What number does the subtraction $4 - 1 = 3$ land on?



- | | | |
|----------|----------|----------|
| a | b | c |
| 3 | 1 | 0 |

7 What number does the subtraction $6 - 1 = 5$ land on?



- | | | | | |
|----------|----------|----------|----------|----------|
| a | b | c | d | e |
| 1 | 9 | 3 | 5 | 2 |