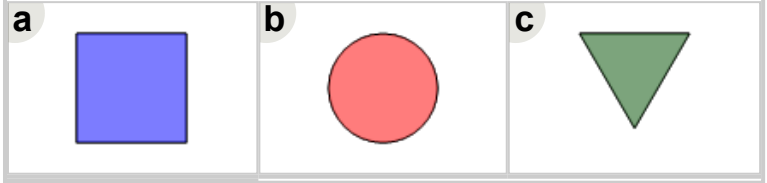





Math worksheet on 'Patterning - Missing from 3 Item Repeating Shape Pattern (Level 2)'. Part of a broader unit on 'Patterning - Visual Patterns Basics'

Learn online: [app.mobius.academy/math/units/patterning\\_visual\\_basics/](http://app.mobius.academy/math/units/patterning_visual_basics/)


1 Find the item that would complete this pattern in the missing space




2 Find the item that would complete this pattern in the missing space





3 Find the item that would complete this pattern in the missing space




4 Find the item that would complete this pattern in the missing space



5 Find the item that would complete this pattern in the missing space



6 Find the item that would complete this pattern in the missing space



7 Find the item that would complete this pattern in the missing space

