



Math worksheet on 'Patterning - Missing from 4 Item Repeating Shape Pattern (Level 1)'. Part of a broader unit on 'Patterning - Visual Patterns Basics'

Learn online: app.mobius.academy/math/units/patterning_visual_basics/

1 Find the item that would complete this pattern in the missing space



a



b



2 Find the item that would complete this pattern in the missing space



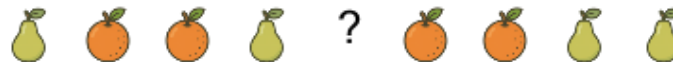
a



b



3 Find the item that would complete this pattern in the missing space



a



b



4 Find the item that would complete this pattern in the missing space



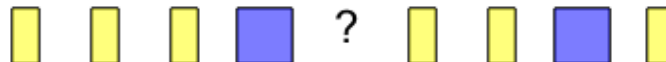
a



b



5 Find the item that would complete this pattern in the missing space




a



b



6 Find the item that would complete this pattern in the missing space



a



b



7 Find the item that would complete this pattern in the missing space



a



b

