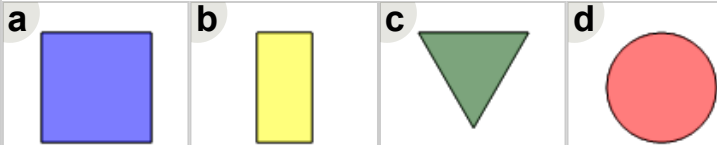




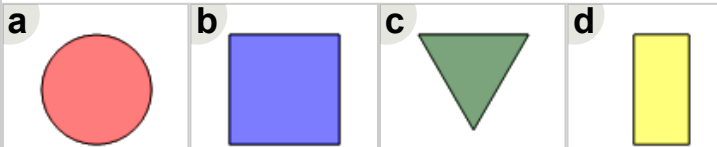
Math worksheet on 'Patterning - Next in 4 Item Repeating Shape Pattern (Level 3)'. Part of a broader unit on 'Patterning - Visual Patterns Basics'

Learn online: app.mobius.academy/math/units/patterning_visual_basics/

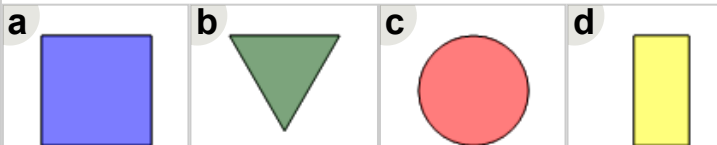
2 Find the item that would be next in this pattern



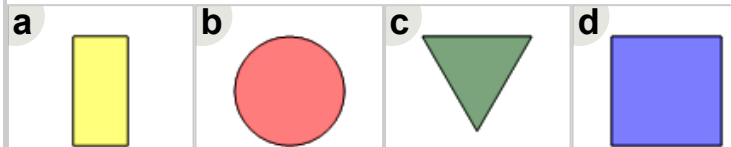
4 Find the item that would be next in this pattern



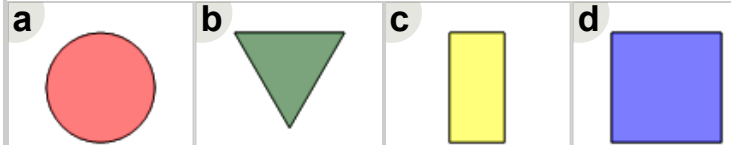
6 Find the item that would be next in this pattern



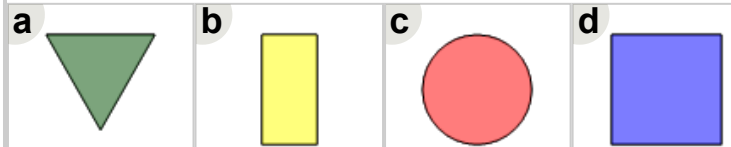
1 Find the item that would be next in this pattern



3 Find the item that would be next in this pattern



5 Find the item that would be next in this pattern



7 Find the item that would be next in this pattern

