

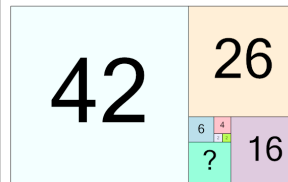


Math worksheet on 'Patterning - Concept Intro (Fibonacci) - Picture to Missing Term (Level 1)'. Part of a broader unit on 'Patterning - Number Patterns Practice'

Learn online: app.mobius.academy/math/units/patterning_number_practice/

1

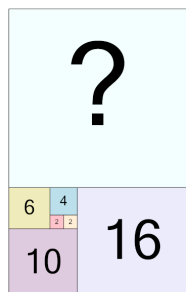
Find the term that would complete this Fibonacci pattern in the missing space



a	5	b	19
c	12	d	15
e	11	f	10

2

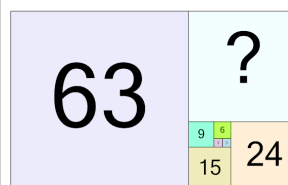
Find the term that would complete this Fibonacci pattern in the missing space



a	30	b	18
c	12	d	28
e	42	f	26

3

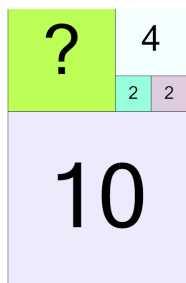
Find the term that would complete this Fibonacci pattern in the missing space



a	9	b	39
c	18	d	33
e	60	f	63

4

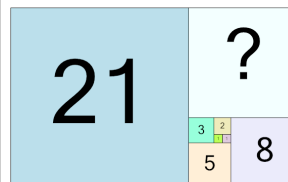
Find the term that would complete this Fibonacci pattern in the missing space



a	3	b	13
c	9	d	6
e	4	f	1

5

Find the term that would complete this Fibonacci pattern in the missing space



a	14	b	17
c	13	d	10
e	9	f	3

6

Find the term that would complete this Fibonacci pattern in the missing space



a	15	b	24
c	10	d	8
e	5	f	9

7

Find the term that would complete this Fibonacci pattern in the missing space



a	15	b	5
c	10	d	14
e	23	f	9