



Math worksheet on 'Patterning - Concept Intro - Picture to Type (Level 2)'. Part of a broader unit on 'Patterning - Number Patterns Practice'

Learn online: app.mobius.academy/math/units/patterning_number_practice/

1

What type of pattern is shown here?



a

Geometric

b

Repeating

2

What type of pattern is shown here?



a

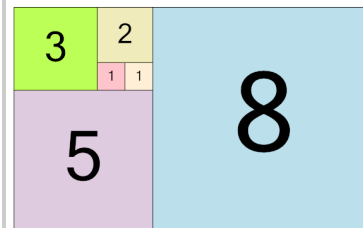
Increasing (Arithmetic)

b

Geometric

3

What type of pattern is shown here?



a

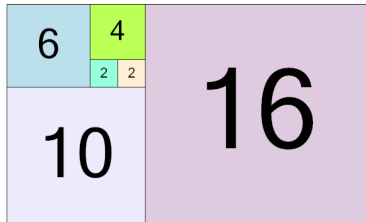
Decreasing (Arithmetic)

b

Fibonacci

4

What type of pattern is shown here?



a

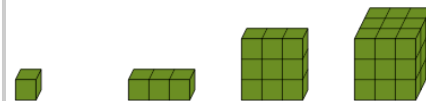
Fibonacci

b

Geometric

5

What type of pattern is shown here?



a

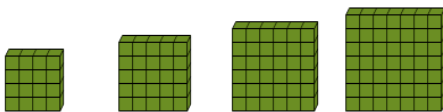
Fibonacci

b

Geometric

6

What type of pattern is shown here?



a

Quadratic

b

Repeating

7

What type of pattern is shown here?



a

Repeating

b

Fibonacci