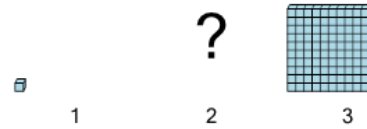




Math worksheet on 'Patterning - Concept Intro (Place Value) - Picture to Missing Term (Level 1)'.
Part of a broader unit on 'Patterning - Number Patterns Intro'

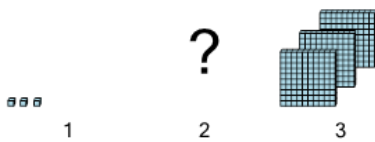
Learn online: app.mobius.academy/math/units/patterning_number_intro/

1 Find the term that would complete this place value pattern in the missing space



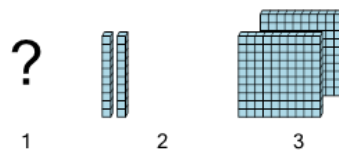
a	10	b	10,000
c	100	d	1,000
e	1	f	0

2 Find the term that would complete this place value pattern in the missing space



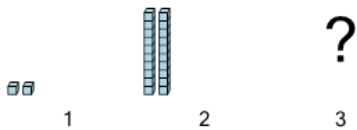
a	3,000	b	300
c	30	d	3
e	30,000	f	0

3 Find the term that would complete this place value pattern in the missing space



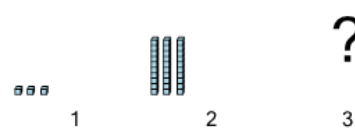
a	20	b	2,000	c	200	d	2	e	0
---	----	---	-------	---	-----	---	---	---	---

4 Find the term that would complete this place value pattern in the missing space



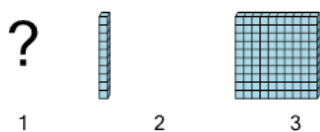
a	200,000	b	20
c	200	d	2,000
e	0	f	2

5 Find the term that would complete this place value pattern in the missing space



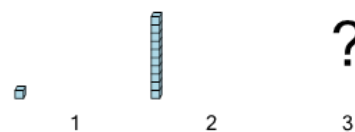
a	300	b	3
c	0	d	30
e	300,000	f	30,000

6 Find the term that would complete this place value pattern in the missing space



a	b	c	d	e
100	10	0	1,000	1

7 Find the term that would complete this place value pattern in the missing space



a	b
100,000	10,000
c	d
10	100
e	f
0	1,000