

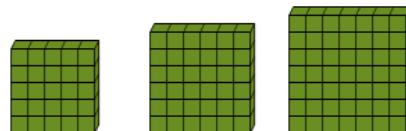


Math worksheet on 'Patterning - Concept Intro (Quadratic) - Picture to Missing Term (Level 1)'. Part of a broader unit on 'Patterning - Number Patterns Practice'

Learn online: app.mobius.academy/math/units/patterning_number_practice/

1 Find the term that would complete this quadratic pattern in the missing space

?

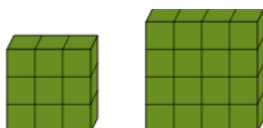


a	b	c	d	e	f
36	16	21	46	1	11

2 Find the term that would complete this quadratic pattern in the missing space



?

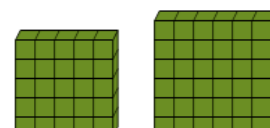


a	b	c	d	e	f
6	29	9	14	1	4

3 Find the term that would complete this quadratic pattern in the missing space



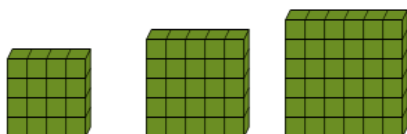
?



a	b	c	d	e	f
16	6	36	1	46	11

4 Find the term that would complete this quadratic pattern in the missing space

?

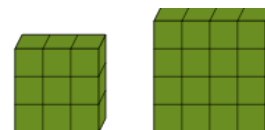


a	b	c	d	e	f
24	34	9	16	6	19

5 Find the term that would complete this quadratic pattern in the missing space




?



a	b	c	d	e	f
24	29	21	34	1	4

6 Find the term that would complete this quadratic pattern in the missing space


?



a	b	c	d	e	f
5	10	45	15	50	25

7 Find the term that would complete this quadratic pattern in the missing space

?



a	b	c	d	e	f
34	16	1	24	9	4