

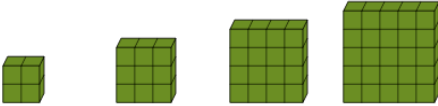


Math worksheet on 'Patterning - Concept Intro - (Quadratic) - Picture to Term List (Level 1)'. Part of a broader unit on 'Patterning - Number Patterns Practice'

Learn online: app.mobius.academy/math/units/patterning_number_practice/

2

Find the terms shown in this quadratic pattern

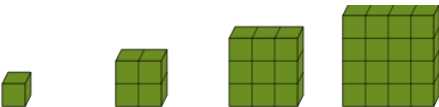


a 18, 17, 16

b 4, 9, 16, 25

4

Find the terms shown in this quadratic pattern




a 1, 4, 9, 16

b 2, 5, 8

6

Find the terms shown in this quadratic pattern

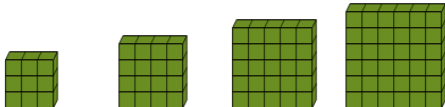


a 3, 7, 11

b 1, 4, 9, 16

1

Find the terms shown in this quadratic pattern

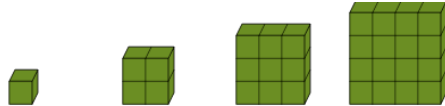


a 23, 22, 21

b 9, 16, 25, 36

3

Find the terms shown in this quadratic pattern

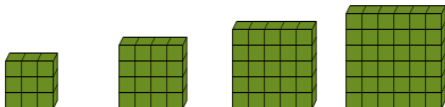


a 20, 18, 16, 14

b 1, 4, 9, 16

5

Find the terms shown in this quadratic pattern

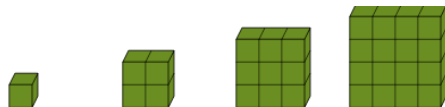


a 9, 16, 25, 36

b 1, 2, 3, 5

7

Find the terms shown in this quadratic pattern



a 2, 9, 2, 9, 2, 9

b 1, 4, 9, 16