

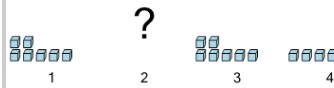


Math worksheet on 'Patterning - Concept Intro (Repeating) - Picture to Missing Term (Level 1)'. Part of a broader unit on 'Patterning - Number Patterns Intro'

Learn online: app.mobius.academy/math/units/patterning_number_intro/

1

Find the term that would complete this repeating pattern in the missing space



a	b
7	4

2

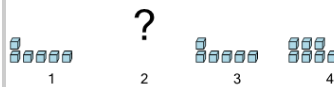
Find the term that would complete this repeating pattern in the missing space



a	b
6	2

3

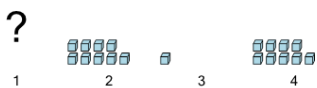
Find the term that would complete this repeating pattern in the missing space



a	b
6	8

4

Find the term that would complete this repeating pattern in the missing space



a	b
1	9

5

Find the term that would complete this repeating pattern in the missing space



a	b
4	6

6

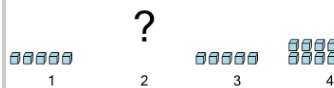
Find the term that would complete this repeating pattern in the missing space



a	b
5	7

7

Find the term that would complete this repeating pattern in the missing space



a	b
9	5