

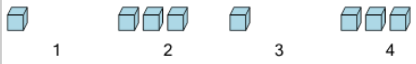


Math worksheet on 'Patterning - Concept Intro (Repeating) - Picture to Term List (Level 1)'. Part of a broader unit on 'Patterning - Number Patterns Intro'

Learn online: app.mobius.academy/math/units/patterning_number_intro/

2

Find the terms shown in this repeating pattern




1 2 3 4

a	1, 4, 9
b	1, 3, 1, 3

4

Find the terms shown in this repeating pattern




1 2 3 4

a	1, 2, 3
b	3, 8, 3, 8

6

Find the terms shown in this repeating pattern




1 2 3 4

a	8, 5, 8, 5
b	2, 6, 10

1

Find the terms shown in this repeating pattern




1 2 3 4

a	2, 6, 2, 6
b	3, 7, 11, 15

3

Find the terms shown in this repeating pattern




1 2 3 4

a	9, 2, 9, 2
b	2, 4, 6

5

Find the terms shown in this repeating pattern




1 2 3 4

a	7, 3, 7, 3
b	1, 2, 3, 5, 8, 13

7

Find the terms shown in this repeating pattern



1 2 3 4

a	2, 4, 6, 8
b	2, 5, 2, 5