





Math worksheet on 'Patterning - Term Value for 2 Item Repeating Shape Pattern (Easy Text) (Level 1)'. Part of a broader unit on 'Patterning - Visual Patterns Basics'

Learn online: [app.mobius.academy/math/units/patterning\\_visual\\_basics/](http://app.mobius.academy/math/units/patterning_visual_basics/)

**2** What shape is the 3rd in this pattern


1 2 3 4 5


**a** 

**b** 

**1** What shape is the 2nd in this pattern


1 2 3 4 5


**a** 

**b** 

**3** What shape is the 1st in this pattern


1 2 3 4 5


**a** 

**b** 

**4** What shape will be at the 7th position in this pattern


1 2 3 4 5 6


**a** 

**b** 

**5** What shape will be at the 7th position in this pattern


1 2 3 4 5 6


**a** 

**b** 

**6** What shape will be at the 6th position in this pattern


1 2 3 4 5

**a** 

**b** 

**7** What shape is the 1st in this pattern

1 2 3 4 5

**a** 

**b** 