





Math worksheet on 'Patterning - Term Value for 3 Item Repeating Shape Pattern (Easy Text) (Level 1)'. Part of a broader unit on 'Patterning - Visual Patterns Basics'

Learn online: [app.mobius.academy/math/units/patterning\\_visual\\_basics/](http://app.mobius.academy/math/units/patterning_visual_basics/)


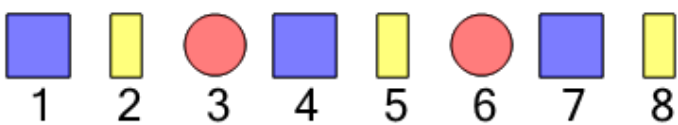
2 What shape will be at the 8th position in this pattern




4 What shape is the 6th in this pattern




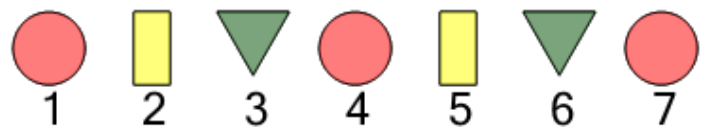
6 What shape is the 4th in this pattern




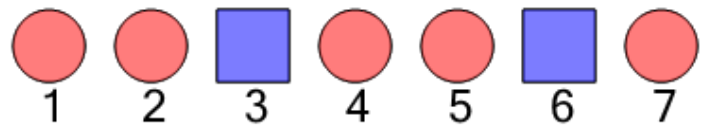
1 What shape is the 1st in this pattern



3 What shape is the 4th in this pattern



5 What shape is the 5th in this pattern



7 What shape is the 1st in this pattern

