



Math worksheet on 'Patterning - Term Value for 2 Item Repeating Shape Pattern (Level 3)'. Part of a broader unit on 'Patterning - Visual Patterns Intro'

Learn online: app.mobius.academy/math/units/patterning_visual_intro/

1

What shape will be at $n=10$ in this pattern



a

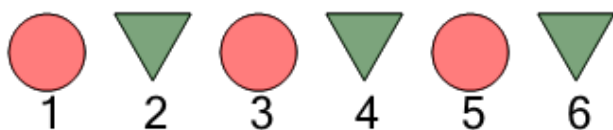


b



2

What shape will be at $n=13$ in this pattern



a

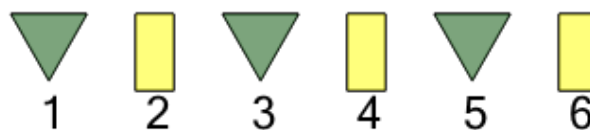


b



3

What shape will be at $n=11$ in this pattern



a

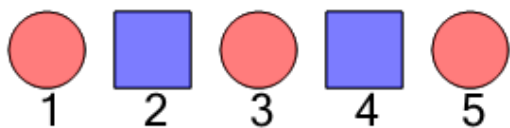


b



4

What shape will be at $n=9$ in this pattern



a

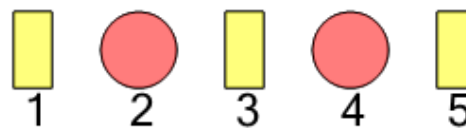


b



5

What shape will be at $n=8$ in this pattern



a



b



6

What shape will be at $n=8$ in this pattern



a




b



7

What shape will be at $n=11$ in this pattern



a



b

