

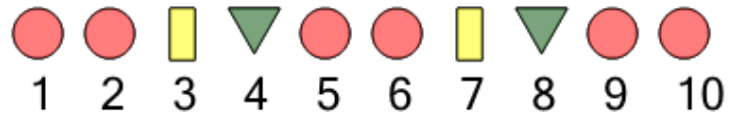


Math worksheet on 'Patterning - Term Value for 4 Item Repeating Shape Pattern (Level 3)'. Part of a broader unit on 'Patterning - Visual Patterns Intro'

Learn online: app.mobius.academy/math/units/patterning_visual_intro/

1

What shape will be at $n=18$ in this pattern



a



b



c



2

What shape will be at $n=17$ in this pattern



a



b



c

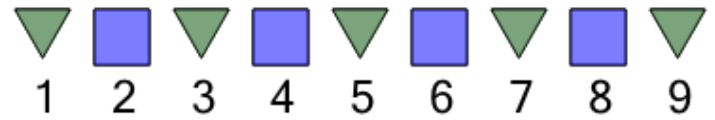


d



3

What shape will be at $n=17$ in this pattern



a



b



4

What shape will be at $n=12$ in this pattern



a



b



c



d



5

What shape will be at $n=14$ in this pattern




a



b

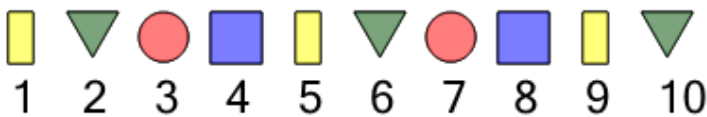


c



6


What shape will be at $n=13$ in this pattern



a



b



c

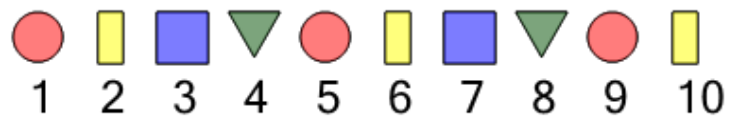


d



7

What shape will be at $n=16$ in this pattern



a



b



c



d

