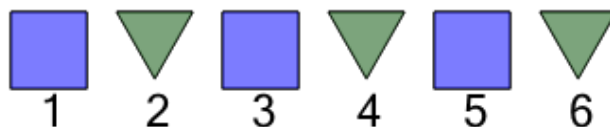




Math worksheet on 'Patterning - Term Value Identification for 2 Item Repeating Shape Pattern (Easy Text) (Level 1)'. Part of a broader unit on 'Patterning - Visual Patterns Basics'

Learn online: app.mobius.academy/math/units/patterning_visual_basics/

1 What shape will be at the 8th position in this pattern



a



b



2 What shape will be at the 7th position in this pattern



a



b



3 What shape is the 2nd in this pattern



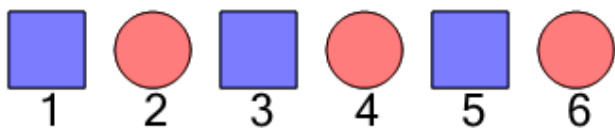
a



b



4 What shape will be at the 8th position in this pattern



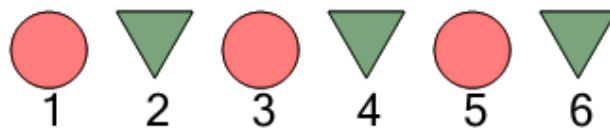
a



b



5 What shape is the 4th in this pattern




a



b



6 What shape will be at the 7th position in this pattern



a



b



7 What shape is the 2nd in this pattern



a



b

