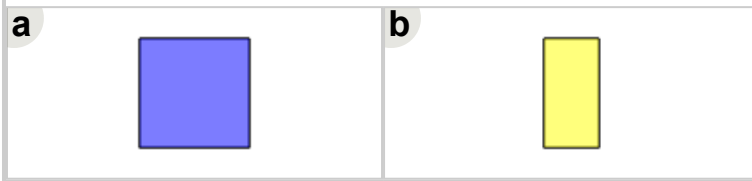
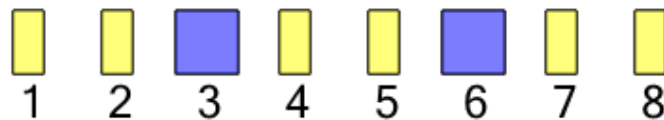





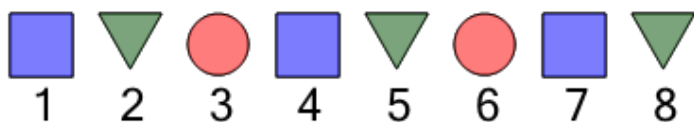
Math worksheet on 'Patterning - Term Value Identification for 3 Item Repeating Shape Pattern (Easy Text) (Level 1)'. Part of a broader unit on 'Patterning - Visual Patterns Basics'

Learn online: [app.mobius.academy/math/units/patterning\\_visual\\_basics/](http://app.mobius.academy/math/units/patterning_visual_basics/)


1 What shape will be at the 9th position in this pattern



2 What shape will be at the 10th position in this pattern



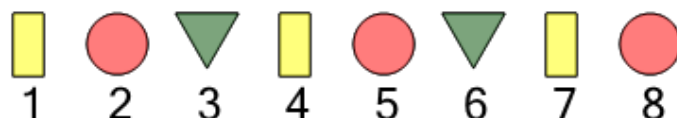
3 What shape is the 6th in this pattern




4 What shape is the 2nd in this pattern



5 What shape is the 5th in this pattern



6 What shape will be at the 9th position in this pattern



7 What shape will be at the 9th position in this pattern

