




Math worksheet on 'Percent of a number (5%) - Picture Question (Level 1)'. Part of a broader unit on 'Percentages - Intro'

Learn online: app.mobius.academy/math/units/percentages_intro/


1 What would a 5% tip be?

a	b	c
0.2	2.3	2
d	e	f
0.4	200	0.5




2 What would a 5% tip be?

a	b	c
1.4	0.2	1
d	e	f
100	10	1.2




3 What would a 5% tip be?

a	b	c
200	0.2	20
d	e	f
0.4	0.5	2




4 What would a 5% tip be?

a	b	c
0.2	0.5	2.2
d	e	f
2	2.3	200




5 What would a 5% tip be?

a	b	c
2.1	0.4	2.2
d	e	f
2	2.4	200



6 What would a 5% tip be?

a	b	c
0.4	2	0.2
d	e	f
20	2.4	0.5



7 What would a 5% tip be?

a	b	c
0.1	1	1.4
d	e	f
100	10	0.2

