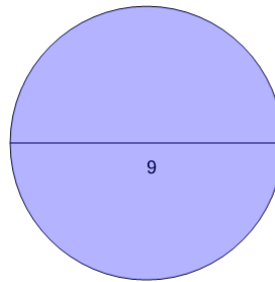




Math worksheet on 'Circumference from Diameter (with calculator) (Level 1)'. Part of a broader unit on 'Geometry - Circle Circumference - Intro'

Learn online: app.mobius.academy/math/units/geometry_circles_perimeter_intro/

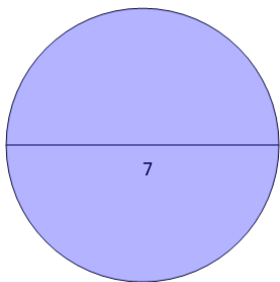
1



Find the circumference of the circle

a	40.5	b	28.27
c	9	d	40.84
e	63.62	f	34.56

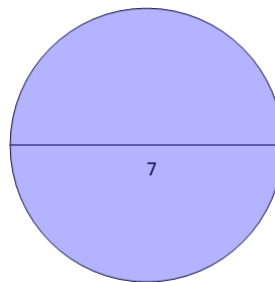
2



Find the circumference of the circle

a	21.99	b	40.84
c	7	d	11
e	24.5	f	47.12

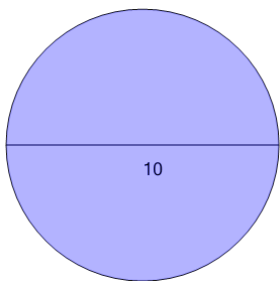
3



Find the circumference of the circle

a	7	b	24.5
c	21.99	d	11
e	28.27	f	38.48

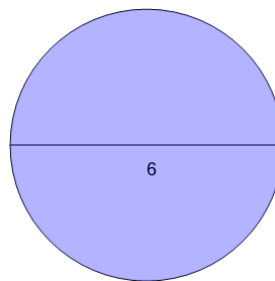
4



Find the circumference of the circle

a	78.54	b	43.98
c	50	d	31.42
e	10	f	15.71

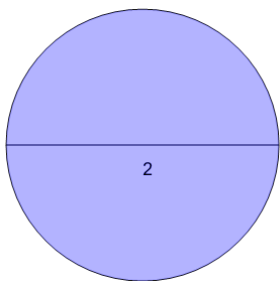
5



Find the circumference of the circle

a	37.7	b	31.42
c	6	d	18
e	18.85	f	25.13

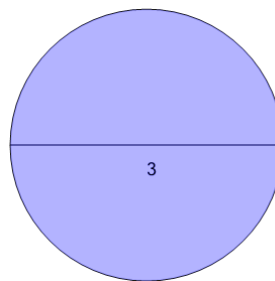
6



Find the circumference of the circle

a	31.42	b	2
c	3.14	d	6.28

7



Find the circumference of the circle

a	3	b	9.42
c	7.07	d	15.71
e	4.5	f	4.71