

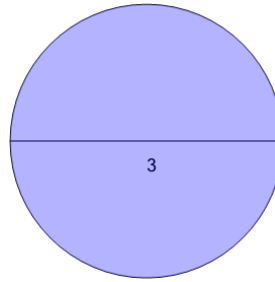


Math worksheet on 'Circumference - to Pi Value (Level 1)'. Part of a broader unit on 'Geometry - Surface Area of 3D Shapes - Intro'

Learn online:

app.mobius.academy/math/units/geometry_surface_area_basic_shapes_intro/

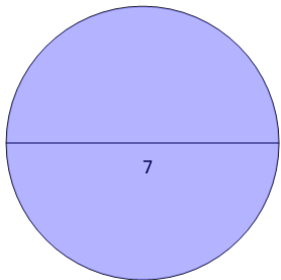
1



Find the circumference of the circle as a function of π

a	12π	b	7π
c	10π	d	2π
e	11π	f	3π

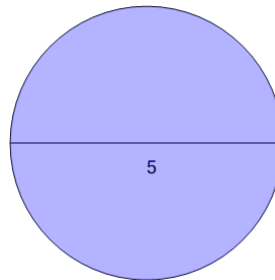
2



Find the circumference of the circle as a function of π

a	7π	b	2π
c	12π	d	3π
e	8π	f	13π

3



Find the circumference of the circle as a function of π

a	5π	b	9π
c	4π	d	7π
e	1π	f	10π