



Math worksheet on 'Perimeter of a Kite - Picture Intro (Level 1)'. Part of a broader unit on 'Perimeter Advanced'

Learn online: app.mobius.academy/math/units/perimeter_advanced/

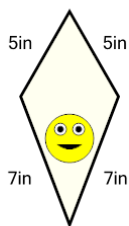
1



How long is the fence around this yard?

a	10m	b	8m
c	22m	d	15m
e	18m	f	11m

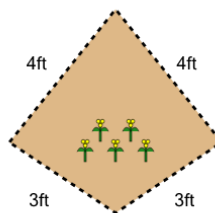
2



How long is the border around the outside of this painting?

a	32in	b	34in
c	14in	d	24in
e	12in	f	40in

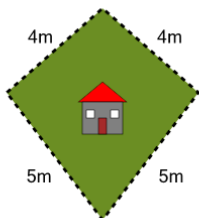
3



How long is the fence around this garden?

a	21ft	b	9ft
c	14ft	d	22ft
e	6ft	f	4ft

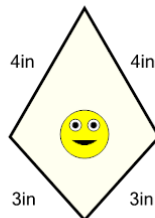
4



How long is the fence around this yard?

a	18m	b	23m
c	15m	d	26m
e	12m	f	27m

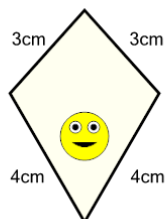
5



How long is the border around the outside of this painting?

a	19in	b	21in
c	5in	d	22in
e	14in	f	7in

6



How long is the border around the outside of this painting?

a	6cm	b	14cm
c	11cm	d	17cm
e	20cm	f	7cm

7



How long is the fence around this yard?

a	21m	b	24m
c	18m	d	16m
e	8m	f	11m