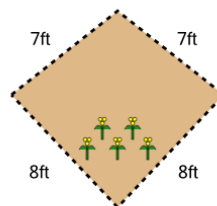




Math worksheet on 'Perimeter of a Kite - Picture Intro (Level 2)'. Part of a broader unit on 'Perimeter Intro'

Learn online: app.mobius.academy/math/units/perimeter_intro/

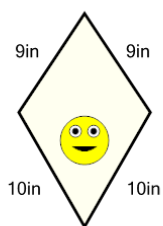
1



How long is the fence around this garden?

a	3ft	b	24ft
c	30ft	d	48ft
e	21ft	f	45ft

2



How long is the border around the outside of this painting?

a	35in	b	38in
c	26in	d	8in
e	50in	f	17in

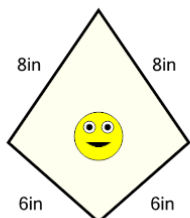
3



How long is the fence around this yard?

a	4m	b	40m
c	34m	d	37m
e	61m	f	31m

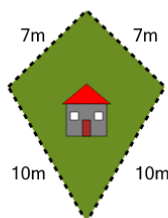
4



How long is the border around the outside of this painting?

a	14in	b	34in
c	46in	d	28in
e	40in	f	22in

5



How long is the fence around this yard?

a	37m	b	46m
c	31m	d	19m
e	34m	f	22m

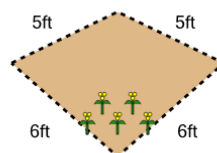
6



How long is the fence around this yard?

a	36m	b	45m
c	24m	d	57m
e	12m	f	30m

7



How long is the fence around this garden?

a	18ft	b	22ft
c	36ft	d	26ft
e	40ft	f	6ft