

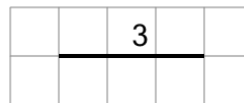


Math worksheet on 'Length of a Line on a Grid - 1 Segment, 1 Labelled (Irregular) - To Length (Level 1)'. Part of a broader unit on 'Perimeter Intro'

Learn online: app.mobius.academy/math/units/perimeter_intro/

1

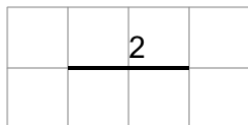
Find the length of the line on this grid of 1x1 squares



a	6	b	5
c	9	d	3
e	10	f	7

2

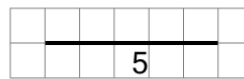
Find the length of the line on this grid of 1x1 squares



a	1	b	4
c	7	d	2
e	3	f	8

3


Find the length of the line on this grid of 1x1 squares



a	9	b	1
c	5	d	4
e	2	f	6

4

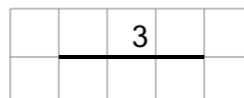
Find the length of the line on this grid of 1x1 squares



a	6	b	10
c	8	d	4
e	2	f	3

5

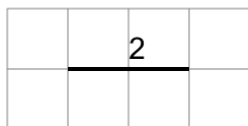
Find the length of the line on this grid of 1x1 squares



a	7	b	10
c	3	d	6
e	9	f	2

6

Find the length of the line on this grid of 1x1 squares



a	5	b	1
c	7	d	6
e	2	f	8